


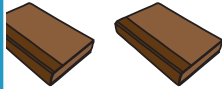
Name : _____

Pictograph - Library



Sheet 2

The members lend books from the Master Mind Library. The pictograph shows the number of books checked out in five days. Use the information from the graph to answer the questions.

Library	
Day	Number of Books Checked Out
Monday	
Tuesday	
Wednesday	
Thursday	
Friday	

PREVIEW

Gain complete access to the largest collection of worksheets in all subjects!

Members, please log in to download this worksheet.

Not a member? Please sign up to gain complete access.


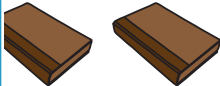
www.mathworksheets4kids.com

- 1) How many books were checked out on Thursday? _____
- 2) Which day fewest books were checked out? _____
- 3) How many fewer books were checked out on Monday than Friday? _____
- 4) Name the days where the number of checkouts was less than 50 books. _____
- 5) How many books were lent in 5 days? _____

Pictograph - Library



The members lend books from the Master Mind Library. The pictograph shows the number of books checked out in five days. Use the information from the graph to answer the questions.

Library	
Day	Number of Books Checked Out
Monday	
Tuesday	
Wednesday	
Thursday	
Friday	

PREVIEW

Gain complete access to the largest collection of worksheets in all subjects!

Members, please log in to download this worksheet.

Not a member? Please sign up to gain complete access.

www.mathworksheets4kids.com

- How many books were checked out on Thursday? 28
- Which day fewest books were checked out? Thursday
- How many fewer books were checked out on Monday than Friday? 14
- Name the days where the number of checkouts was less than 50 books. Wednesday and Thursday
- How many books were lent in 5 days? 280