




Name : _____

Pictograph - Pizza Sales



Sheet 3

The pictograph shows the sales of pizzas in five rivalry pizzerias on Friday. Use the information from the graph to answer the questions.

Pizza Sales	
Pizzeria	Number of Pizzas
Pizza House	
Domiano's Pizz	
Poppers Pizza	
Little Secrets Pi	
Uncle John's Piz	

PREVIEW

Gain complete access to the largest collection of worksheets in all subjects!

Members, please log in to download this worksheet.

Not a member? Please sign up to gain complete access.

www.mathworksheets4kids.com

- 1) Which pizzeria has the second largest sales? _____
- 2) How many pizzas were sold by Domiano's Pizza? _____
- 3) How many more pizzas were sold by Uncle John than Little Secrets? _____
- 4) Which pizzeria sold fewer pizzas; Pizza House or Poppers Pizza? _____
- 5) How many more pizzas should Pizza House need to sell to have the sales equal to Domiano's Pizza? _____

Pictograph - Pizza Sales



The pictograph shows the sales of pizzas in five rivalry pizzerias on Friday. Use the information from the graph to answer the questions.

Pizza Sales	
Pizzeria	Number of Pizzas
Pizza House	
Domiano's Pizz	
Poppers Pizza	
Little Secrets Pi	
Uncle John's Piz	

PREVIEW

Gain complete access to the largest collection of worksheets in all subjects!

Members, please log in to download this worksheet.

Not a member? Please sign up to gain complete access.

www.mathworksheets4kids.com

- 1) Which pizzeria has the second largest sales? **Domiano's Pizza**
- 2) How many pizzas were sold by Domiano's Pizza? **100**
- 3) How many more pizzas were sold by Uncle John than Little Secrets? **40**
- 4) Which pizzeria sold fewer pizzas; Pizza House or Poppers Pizza? **Poppers Pizza**
- 5) How many more pizzas should Pizza House need to sell to have the sales equal to Domiano's Pizza? **30**