

Name : _____

Pie Graph - Favorite Beverages

Caroline took a survey among her schoolmates on their favorite beverage. She recorded the information in a table. Draw a pie using the information.

Water	Soft drinks	Fresh juices	Coffee, Tea	Energy drinks
7				14


PREVIEW

Gain complete access to the largest collection of worksheets in all subjects!

Members, please log in to download this worksheet.

Not a member? Please sign up to gain complete access.

www.mathworksheets4kids.com



Name : _____

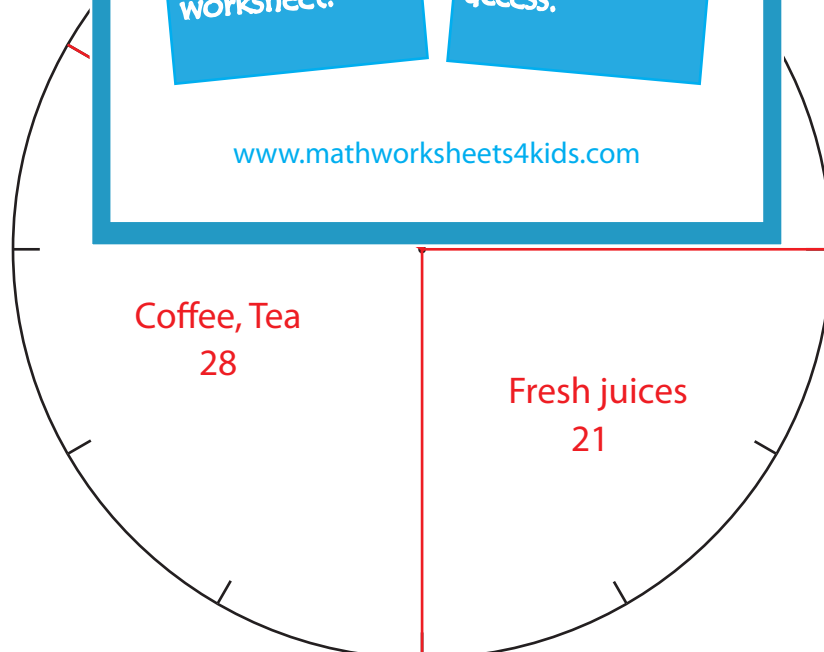

Answer Key

Pie Graph - Favorite Beverages

Caroline took a survey among her schoolmates on their favorite beverage. She recorded the information in a table. Draw a pie using the information.

(Drawings may vary)

Water	Soft drinks	Fresh juices	Coffee, Tea	Energy drinks
7				14



PREVIEW

Gain complete access to the largest collection of worksheets in all subjects!

Members, please log in to download this worksheet.

Not a member? Please sign up to gain complete access.

www.mathworksheets4kids.com