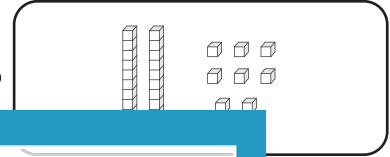


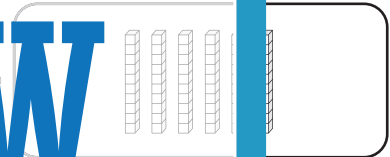
Standard and Expanded Form

A) Match each number with its base-10 block representation.

1) 75 •



2) 34



3) 60



4) 28



PREVIEW

Gain complete access to the largest collection of worksheets in all subjects!

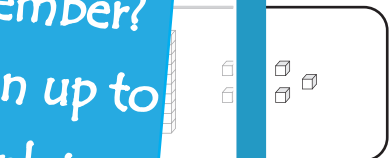
Members, please log in to download this worksheet.

Not a member? Please sign up to gain complete access.

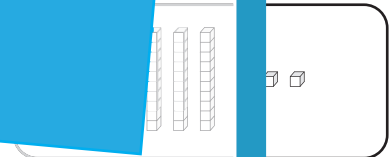
www.mathworksheets4kids.com

B) Match each expanded form with its base-10 block representation.

1) 50 - 2



2) 10 - 5



3) 40



4) 80 + 6 •

