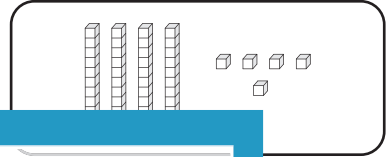


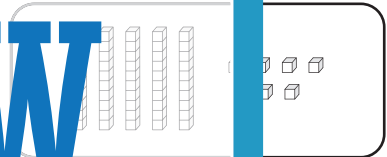
Standard and Expanded Form

A) Match each number with its base-10 block representation.

1) 93 •



2) 17



3) 45

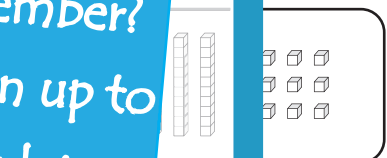


4) 56

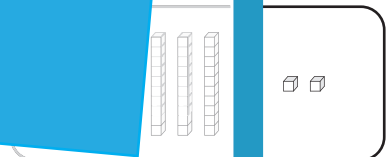


B) Match each number with its correct base-10 block representation.

1) 30



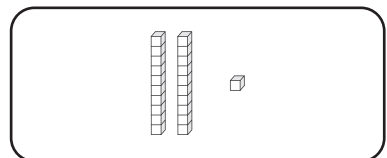
2) 60



3) 20



4) $70 + 2$ •



PREVIEW

Gain complete access to the largest collection of worksheets in all subjects!

Members, please log in to download this worksheet.

Not a member? Please sign up to gain complete access.

www.mathworksheets4kids.com