

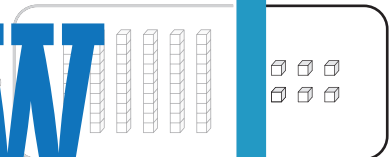
Standard and Expanded Form

A) Match each number with its base-10 block representation.

1) 30 •



2) 24



3) 82



4) 68

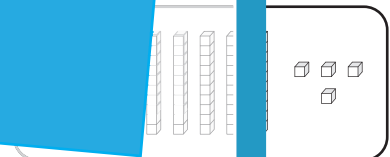


B) Match each number with its correct base-10 block representation.

1) 40



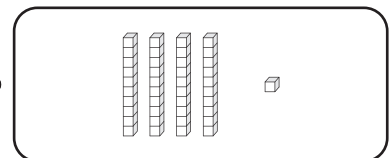
2) 50



3) 10



4) $90 + 4$ •



PREVIEW

Gain complete access to the largest collection of worksheets in all subjects!

Members, please log in to download this worksheet.

Not a member? Please sign up to gain complete access.

www.mathworksheets4kids.com