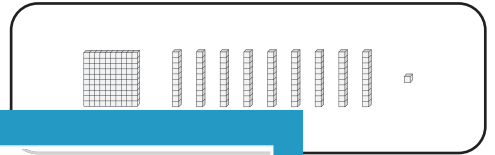


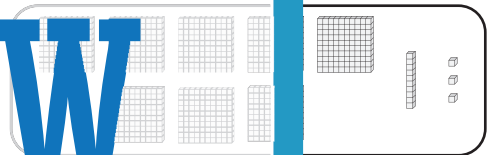
Standard and Expanded Form

A) Match each number with its base-10 block representation.

1) 876 •




2) 405 •



3) 813 •



4) 191 •



B) Match each expanded form with its corresponding number.

1) 300

10

Members, please log in to download this worksheet.

Not a member? Please sign up to gain complete access.

2) 700

50

www.mathworksheets4kids.com

3) 500

100

4) $300 + 30 + 9$ •

