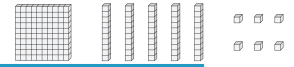



Standard and Expanded Form

A) Match each number with its base-10 block representation.

1) 534 •



2) 156 •



3) 592 •



4) 318 •



B) Match each expanded form with its corresponding number.

1) 700 + 20

20

Members, please log in to download this worksheet.

Not a member? Please sign up to gain complete access.

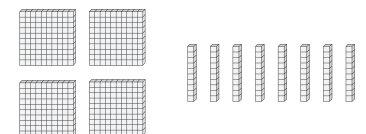
2) 400 + 80

80

3) 200 + 70 + 3

70 + 3

4) 700 + 40 + 3 •



PREVIEW

Gain complete access to the largest collection of worksheets in all subjects!

www.mathworksheets4kids.com