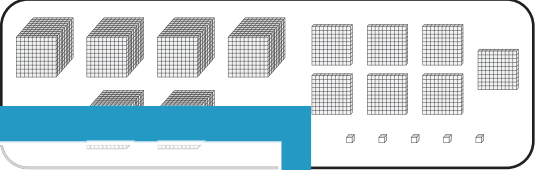


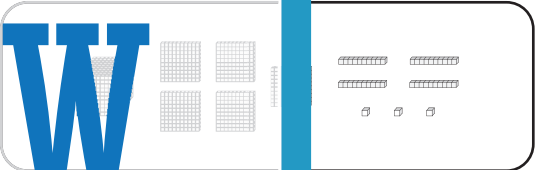
Standard and Expanded Form

A) Match each number with its base-10 block representation.

1) 6,835 •




2) 3,271



3) 6,705

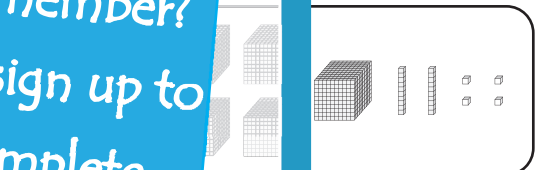


4) 1,543




B) Match each number with its base-10 block representation.


1) 5,000



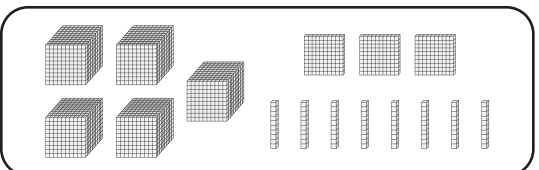
2) 2,000



3) 9,000



4) $5,000 + 100 + 60 + 2$ •



PREVIEW

Gain complete access to the largest collection of worksheets in all subjects!

Members, please log in to download this worksheet.

Not a member? Please sign up to gain complete access.

www.mathworksheets4kids.com