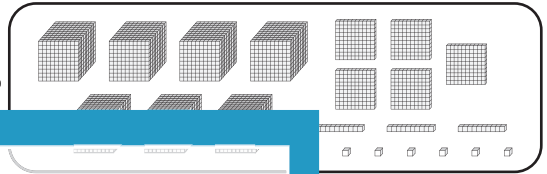



Standard and Expanded Form

A) Match each number with its base-10 block representation.

1) 2,059 •




2) 7,537



3) 5,862



4) 7,403



B) Match each number with the correct base-10 block representation.

1) 4,000

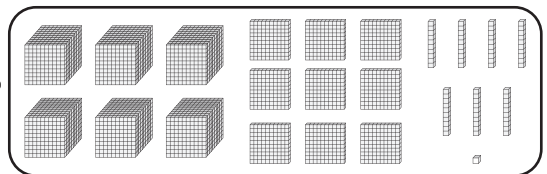



Members, please log in to download this worksheet.

Not a member? Please sign up to gain complete access.

2) 3,000

3) 6,000

4) $3,000 + 600$



www.mathworksheets4kids.com