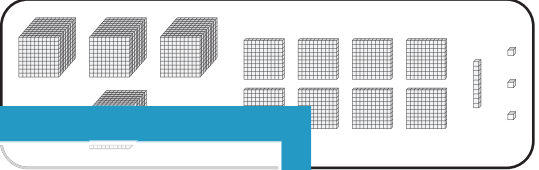


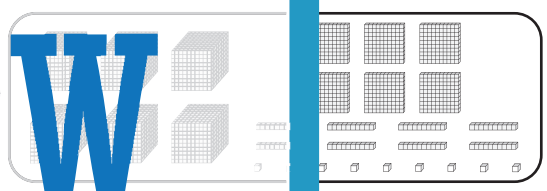
Standard and Expanded Form

A) Match each number with its base-10 block representation.


1) 4,744 •




2) 5,390



3) 4,813



4) 6,689




B) Match each number with its base-10 block representation.

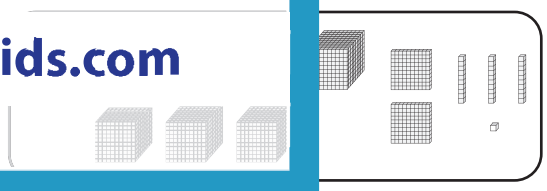
1) 5,000



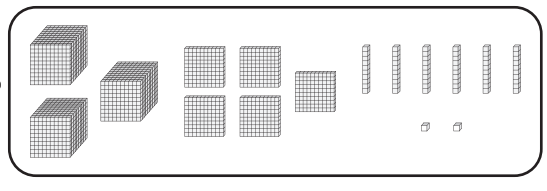
2) 3,000



3) 8,000



4) $8,000 + 200 + 30 + 1$ •



PREVIEW

Gain complete access to the largest collection of worksheets in all subjects!

Members, please log in to download this worksheet.

Not a member? Please sign up to gain complete access.

www.mathworksheets4kids.com