



# Bundles of Tens and Ones

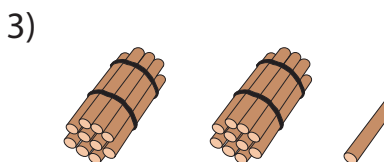
Each bundle has 10 sticks. Count the sticks, and write the number of tens and ones.



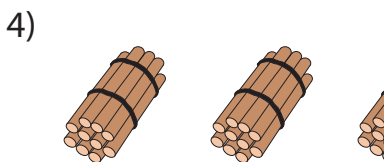
Tens	Ones




Tens	Ones



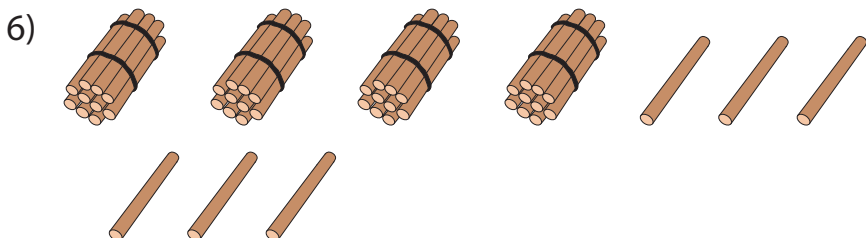
Tens	Ones



Tens	Ones



Tens	Ones



Tens	Ones

## PREVIEW

Gain complete access to the largest collection of worksheets in all subjects!


Members, please log in to download this worksheet.

Not a member? Please sign up to gain complete access.


www.mathworksheets4kids.com

## Bundles of Tens and Ones

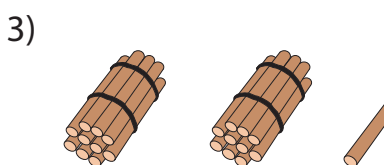
Each bundle has 10 sticks. Count the sticks, and write the number of tens and ones.



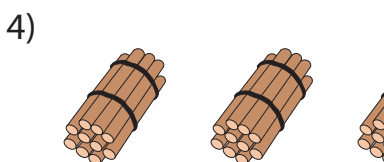
Tens	Ones
6	4



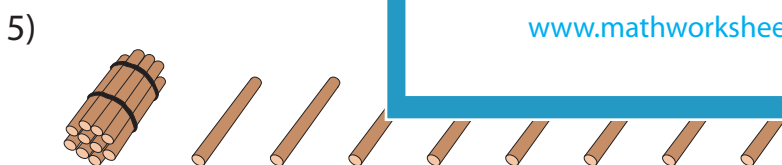
Tens	Ones
8	1



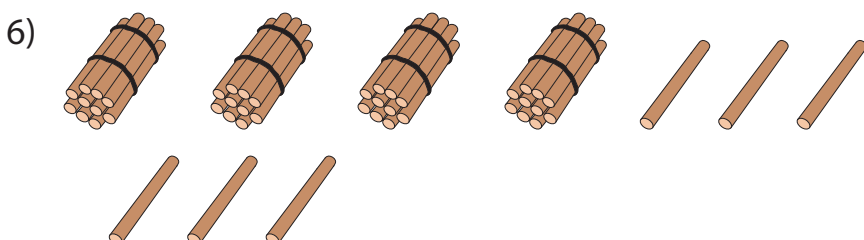
Tens	Ones
2	7



Tens	Ones
3	2



Tens	Ones
1	8



Tens	Ones
4	6

# PREVIEW

Gain complete access to the largest collection of worksheets in all subjects!

Members, please log in to download this worksheet.

Not a member? Please sign up to gain complete access.

[www.mathworksheets4kids.com](http://www.mathworksheets4kids.com)