



Bundles of Tens and Ones

A) Count the number of objects in each set, and write how many in all.

1)  1 ten + _____ ones = _____

2)  1 ten + _____ ones = _____

3)  _____ ones = _____

PREVIEW

Gain complete access to the largest collection of worksheets in all subjects!

Members, please log in to download this worksheet.

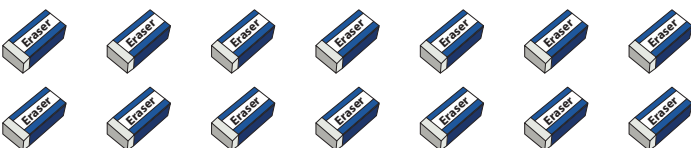
Not a member? Please sign up to gain complete access.

www.mathworksheets4kids.com

B) Circle a group of ten


1)  _____ ten + _____ ones


2)  _____ = _____ ten + _____ ones

3)  _____ = _____ ten + _____ ones

Bundles of Tens and Ones

A) Count the number of objects in each set, and write how many in all.


1)  1 ten + 8 ones = 18

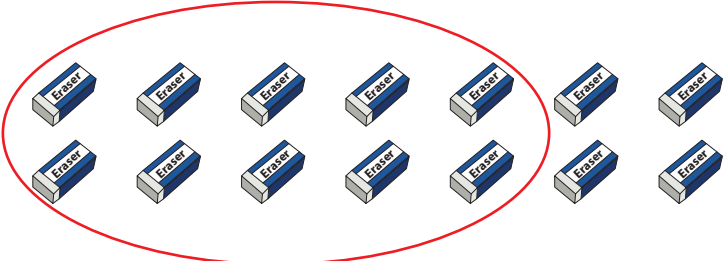
2)  1 ten + 2 ones = 12

3)  5 ones = 15

B) Circle a group of ten objects in each set, and write how many tens and ones.

1)  1 ten + 9 ones

2)  17 = 1 ten + 7 ones

3)  14 = 1 ten + 4 ones

PREVIEW

Gain complete access to the largest collection of worksheets in all subjects!

Members, please log in to download this worksheet.

Not a member? Please sign up to gain complete access.

www.mathworksheets4kids.com