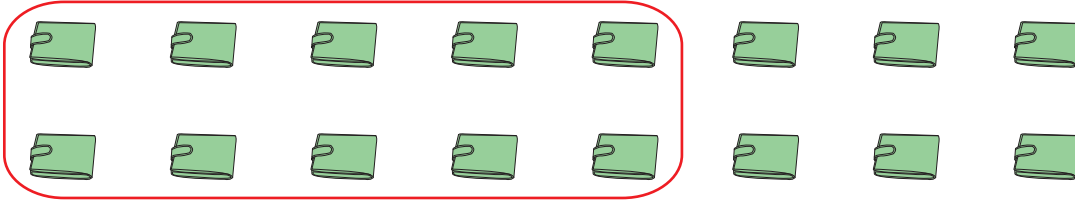


# Bundles of Tens and Ones

Circle each complete group of 10. Count and write the number of tens and ones and the total number in each set.

1)



\_\_\_\_\_ tens + \_\_\_\_\_ ones = \_\_\_\_\_

2)



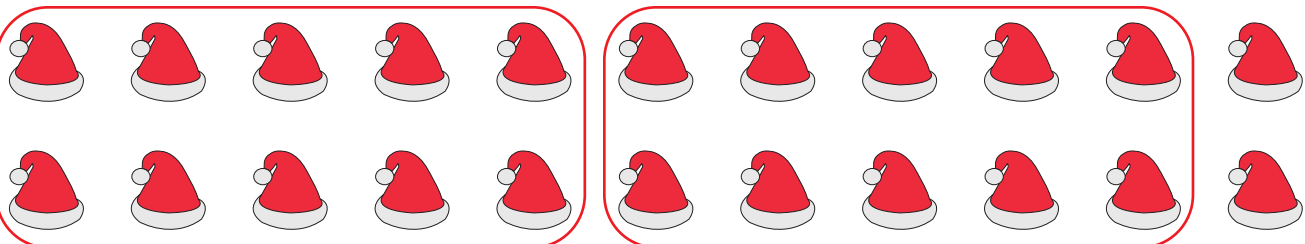
\_\_\_\_\_

3)



\_\_\_\_\_

4)



\_\_\_\_\_ tens + \_\_\_\_\_ ones = \_\_\_\_\_

## PREVIEW

Gain complete access to the largest collection of worksheets in all subjects!

Members, please log in to download this worksheet.

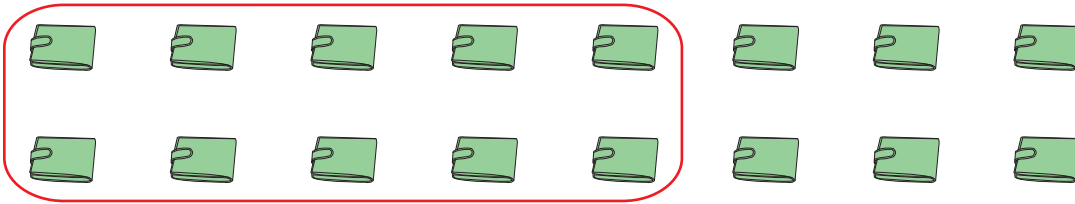
Not a member? Please sign up to gain complete access.

www.mathworksheets4kids.com

## Bundles of Tens and Ones

Circle each complete group of 10. Count and write the number of tens and ones and the total number in each set.

1)



$$\underline{1} \text{ tens} + \underline{6} \text{ ones} = \underline{16}$$

2)



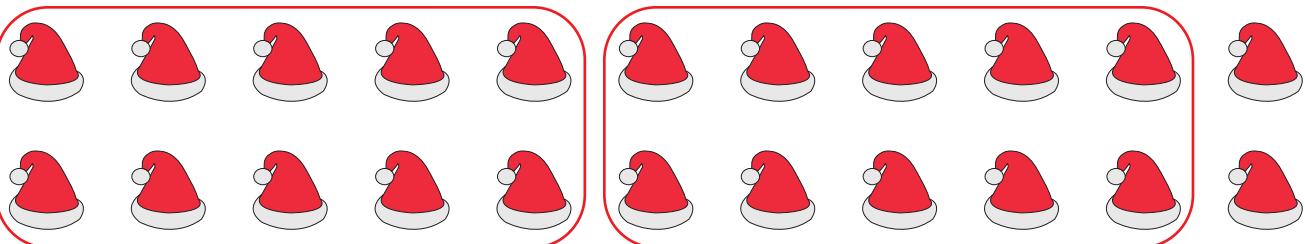
$$\underline{2} \text{ tens} + \underline{7} \text{ ones} = \underline{27}$$

3)



$$\underline{3} \text{ tens} + \underline{4} \text{ ones} = \underline{64}$$

4)



$$\underline{2} \text{ tens} + \underline{2} \text{ ones} = \underline{22}$$

# PREVIEW

Gain complete access to the largest collection of worksheets in all subjects!

Members, please log in to download this worksheet.

Not a member? Please sign up to gain complete access.

[www.mathworksheets4kids.com](http://www.mathworksheets4kids.com)