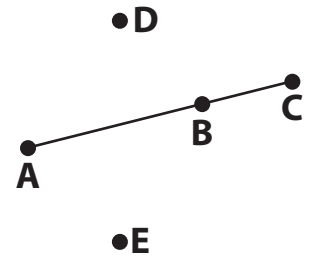


Name : _____

Collinear and Coplanar Chart

Collinear

Points which lie on the same line are called collinear.



A, B, and C are collinear.

Non-collinear


PREVIEW

Gain complete access to the largest collection of worksheets in all subjects!

Members, please log in to download this worksheet.

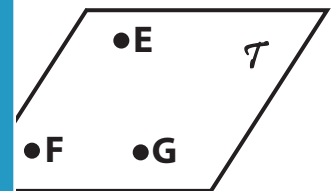
Not a member? Please sign up to gain complete access.

www.mathworksheets4kids.com



X, Y, and Z are non-collinear.

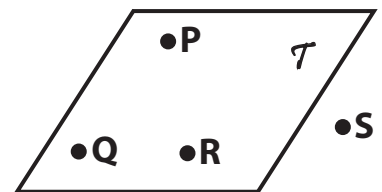
Coplanar



E, F, and G are coplanar.

Non-coplanar

Points or lines which do not lie on the same plane are called non-coplanar.



P, Q, R, and S are non-coplanar.