

Name : _____

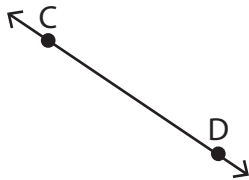
Points, Lines and Planes

Sheet 1


Part - A

Name each figure using symbols.

1)



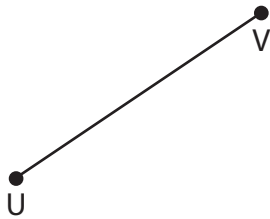
2)




3)



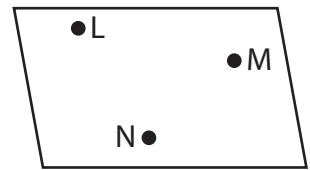
4)



5)



6)



Part - B

Draw and label each of the following.

1) \overleftrightarrow{PQ}

2) Points S and T

3) Plane EFGH

Name : _____

Answer Key

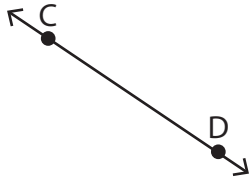
Points, Lines and Planes

Sheet 1

Part - A

Name each figure using symbols.

1)



\overleftrightarrow{CD} or \overleftrightarrow{DC}

2)



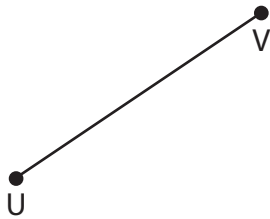
Plane \mathcal{A}

3)




Point R

4)



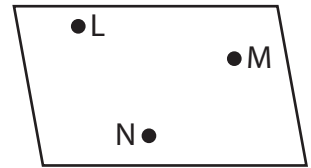
\overline{UV} or \overline{VU}

5)



\overrightarrow{JK}

6)



Plane LMN

Part - B

Draw and label each of the following.

1) \overleftrightarrow{PQ}



2) Points S and T



3) Plane EFGH

