


Name : _____

Interior Angle

ES5

Find the interior angle of each regular polygon. Round your answer to the nearest tenth.

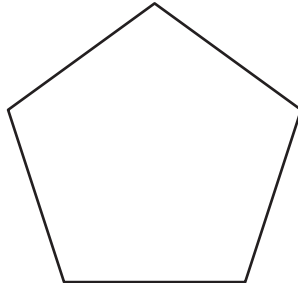
1)



Sum of the interior angles = _____

Each interior angle = _____

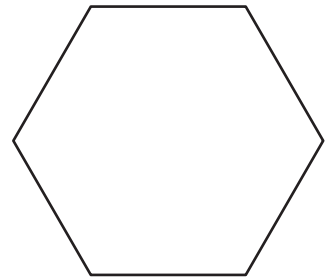
2)



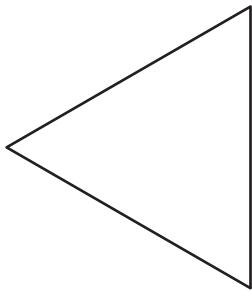
Sum of the interior angles = _____

Each interior angle = _____

3)



4)



Sum of the interior angles = _____

Each interior angle = _____

PREVIEW
Gain complete access to the largest
collection of worksheets in all subjects!

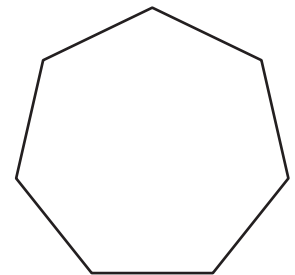
Members, please
log in to
download this
worksheet.

Not a member?
Please sign up to
gain complete
access.

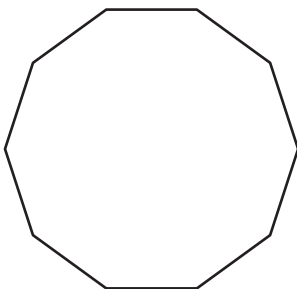
www.mathworksheets4kids.com

Sum of the interior angles = _____

Each interior angle = _____

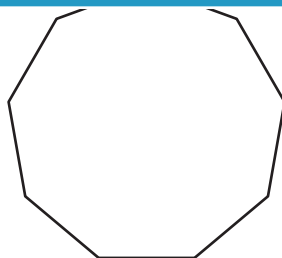


7)



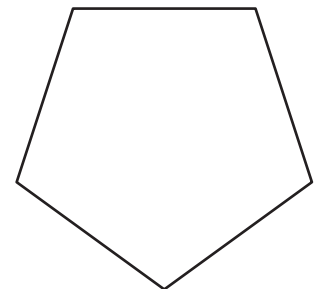
Sum of the interior angles = _____

Each interior angle = _____



Sum of the interior angles = _____

Each interior angle = _____



Sum of the interior angles = _____

Each interior angle = _____

Name : _____


Answer key

Interior Angle

ES5

Find the interior angle of each regular polygon. Round your answer to the nearest tenth.

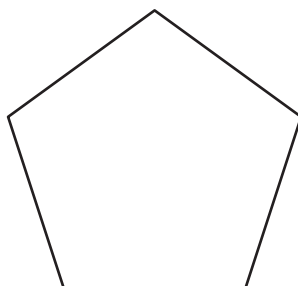
1)



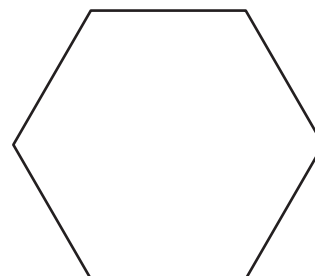
Sum of the interior angles = 360°

Each interior angle = 90°

2)



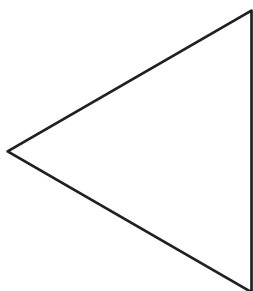
3)



Sum of the interior angles = 720°

Each interior angle = 120°

4)



Sum of the interior angles = 180°

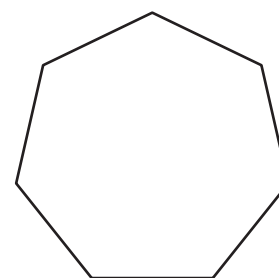
Each interior angle = 60°

Gain complete access to the largest collection of worksheets in all subjects!

Members, please log in to download this worksheet.

Not a member? Please sign up to gain complete access.

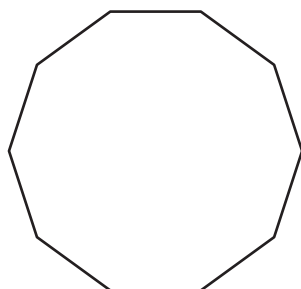
www.mathworksheets4kids.com



Sum of the interior angles = 900°

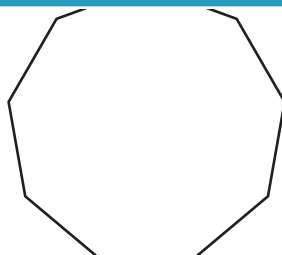
Each interior angle = 128.6°

7)



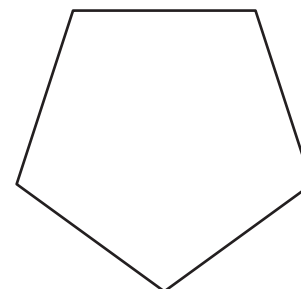
Sum of the interior angles = 1440°

Each interior angle = 144°



Sum of the interior angles = 1260°

Each interior angle = 140°



Sum of the interior angles = 540°

Each interior angle = 108°