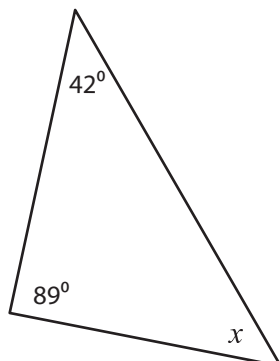


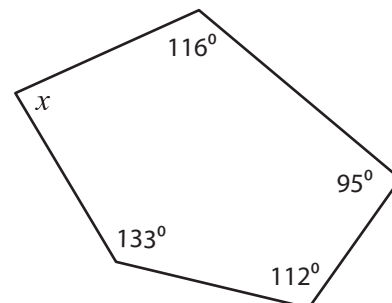
# Interior Angle

Find the value of  $x$ .

1)



2)



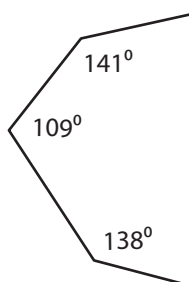
Sum of the interior

interior angles = \_\_\_\_\_

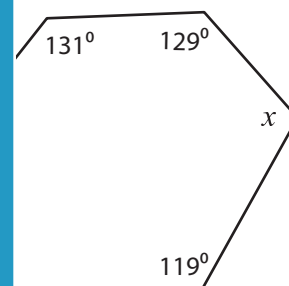
# PREVIEW

$x =$  \_\_\_\_\_

3)



Gain complete access to the largest collection of worksheets in all subjects!



Sum of the interior

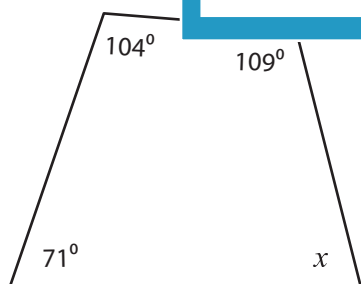
interior angles = \_\_\_\_\_

Members, please log in to download this worksheet.

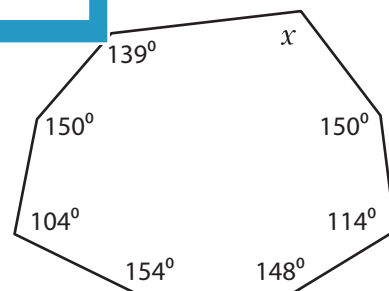
Not a member? Please sign up to gain complete access.

$x =$  \_\_\_\_\_

5)



[www.mathworksheets4kids.com](http://www.mathworksheets4kids.com)



Sum of the interior angles = \_\_\_\_\_

Sum of the interior angles = \_\_\_\_\_

$x =$  \_\_\_\_\_

$x =$  \_\_\_\_\_

Name : \_\_\_\_\_

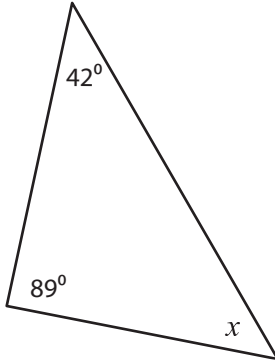
## Answer key

# Interior Angle

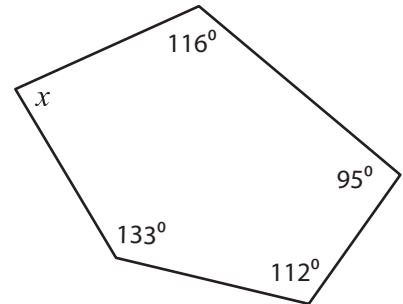
Sheet 2

Find the value of  $x$ .

1)



2)

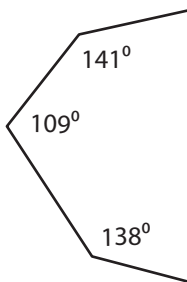


Sum of the interior

interior angles =  $540^\circ$

$x =$  $84^\circ$

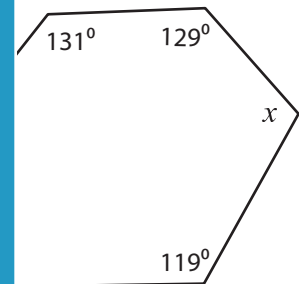
3)



Gain complete access to the largest collection of worksheets in all subjects!

Members, please log in to download this worksheet.

Not a member? Please sign up to gain complete access.

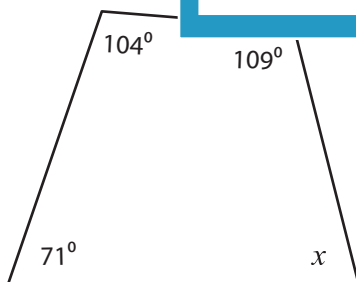


Sum of the interior

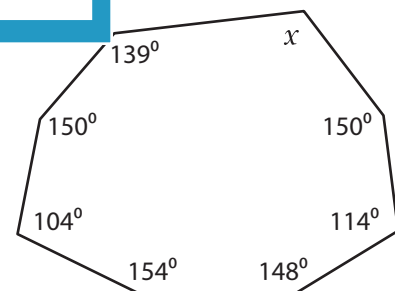
interior angles =  $720^\circ$

$x =$  $110^\circ$

5)



[www.mathworksheets4kids.com](http://www.mathworksheets4kids.com)



Sum of the interior angles =  $360^\circ$

Sum of the interior angles =  $1080^\circ$

$x =$  $76^\circ$

$x =$  $121^\circ$