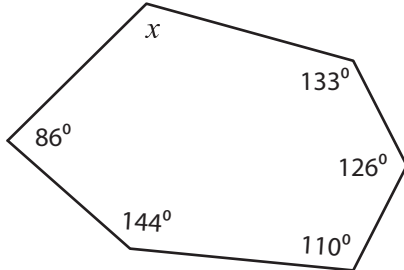


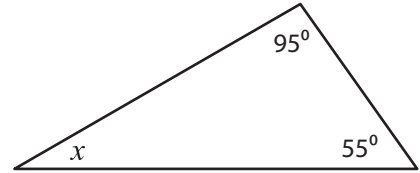
# Interior Angle

Find the value of  $x$ .

1)



2)




Sum of the interior

interior angles = \_\_\_\_\_

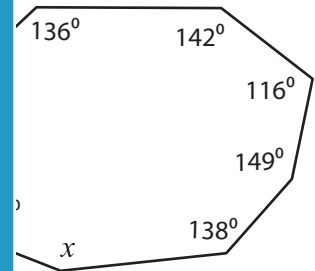
# PREVIEW

$x =$  \_\_\_\_\_

3)



Gain complete access to the largest collection of worksheets in all subjects!



Sum of the interior

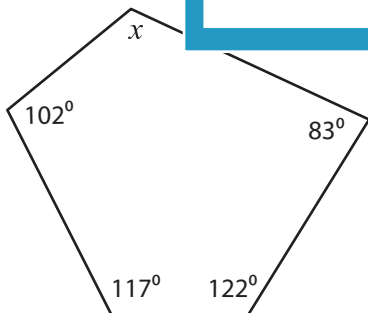
interior angles = \_\_\_\_\_

Members, please log in to download this worksheet.

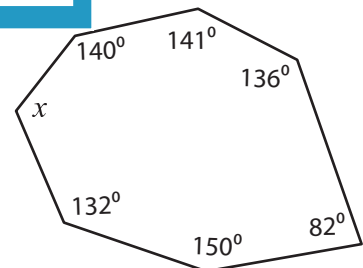
Not a member? Please sign up to gain complete access.

$x =$  \_\_\_\_\_

5)



[www.mathworksheets4kids.com](http://www.mathworksheets4kids.com)



Sum of the interior angles = \_\_\_\_\_

Sum of the interior angles = \_\_\_\_\_

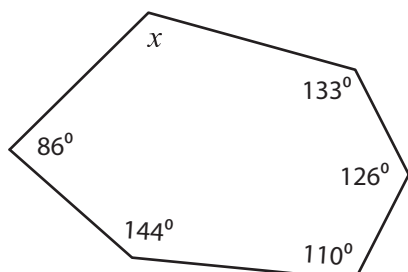
$x =$  \_\_\_\_\_

$x =$  \_\_\_\_\_

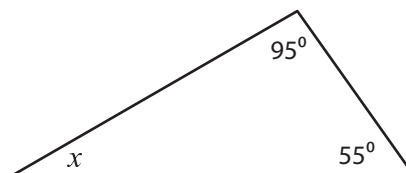
**Interior Angle**

Find the value of x.

1)



2)




Sum of the interior

interior angles = 180°

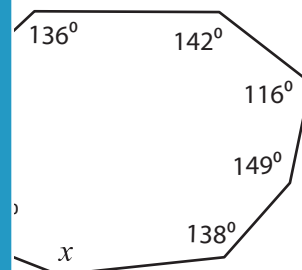
**PREVIEW**

$x =$ 30°

3)



Gain complete access to the largest collection of worksheets in all subjects!



Sum of the interior

interior angles = 1080°

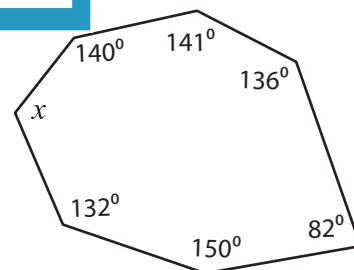
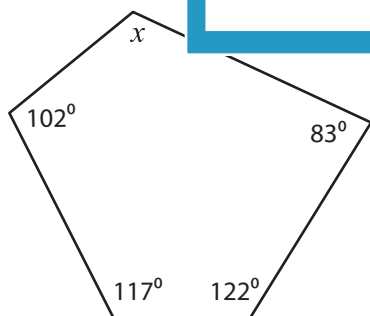
Members, please log in to download this worksheet.

Not a member? Please sign up to gain complete access.

$x =$ 154°

[www.mathworksheets4kids.com](http://www.mathworksheets4kids.com)

5)



Sum of the interior angles = 540°

Sum of the interior angles = 900°

$x =$ 116°

$x =$ 119°