

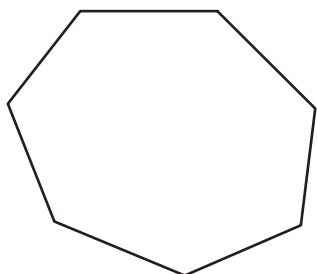
Name : _____

Sum of Interior Angles

ES4

Find the sum of the interior angles of each polygon.

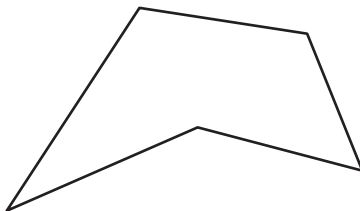
1)



Number of sides = _____

Sum of the interior angles = _____

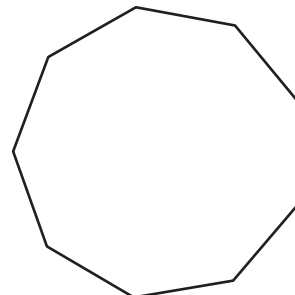
2)



Number of sides = _____

Sum of the interior angles = _____

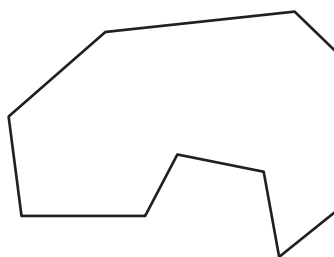
3)



Number of sides = _____

Sum of the interior angles = _____

4)



Number of sides = _____

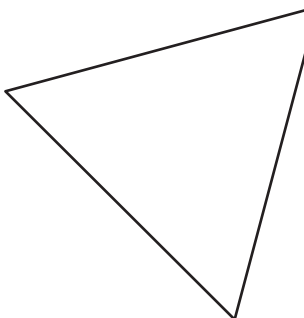
Sum of the interior angles = _____



Number of sides = _____

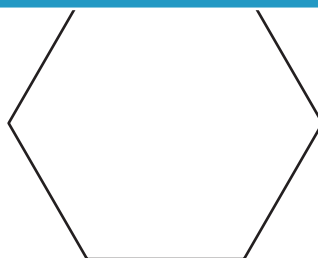
Sum of the interior angles = _____

7)



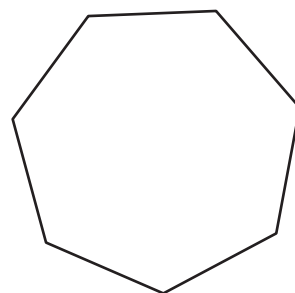
Number of sides = _____

Sum of the interior angles = _____



Number of sides = _____

Sum of the interior angles = _____



Number of sides = _____

Sum of the interior angles = _____

PREVIEW

Gain complete access to the largest collection of worksheets in all subjects!

Members, please log in to download this worksheet.

Not a member? Please sign up to gain complete access.

www.mathworksheets4kids.com