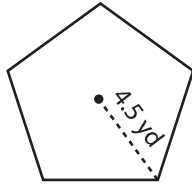


Area of a Polygon

Example:

Find the area of the polygon.



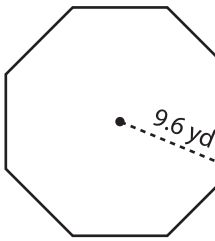
$$\text{Area} = \frac{r^2 \times n \times \sin\left(\frac{360}{n}\right)}{2}$$

$$= \frac{20.25 \times 5 \times \sin\left(\frac{360}{5}\right)}{2} = 48.15 \text{ yd}^2$$

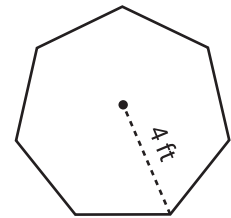
r = circumradius
n = number of sides

Find the area of each polygon using the given circumradius. Round your answer to two decimal places.

1)

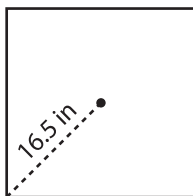


Area = _____

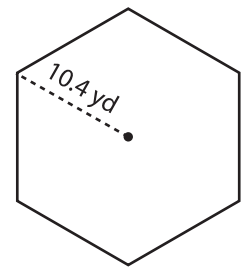


Area = _____

4)

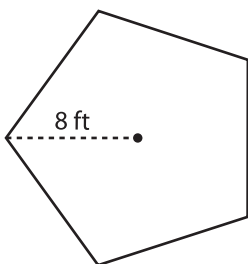


Area = _____



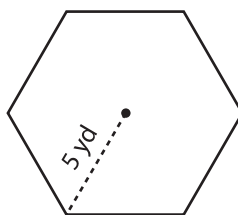
Area = _____

7)



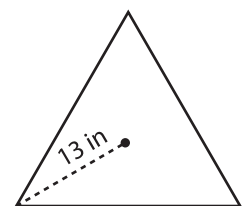
Area = _____

8)



Area = _____

9)



Area = _____

PREVIEW

Gain complete access to the largest collection of worksheets in all subjects!

Members, please log in to download this worksheet.

Not a member? Please sign up to gain complete access.

www.mathworksheets4kids.com