

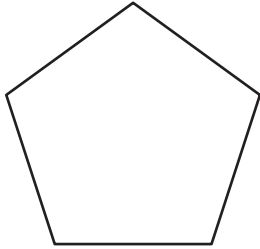
Name : _____

Types of Polygons

Mixed: S1

Write the number of sides and name each polygon.

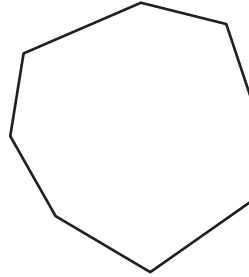
1)



Number of sides

Polygon type

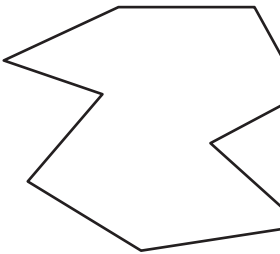
2)



Number of sides

Polygon type

3)



4)

PREVIEW

Gain complete access to the largest collection of worksheets in all subjects!

Members, please log in to download this worksheet.

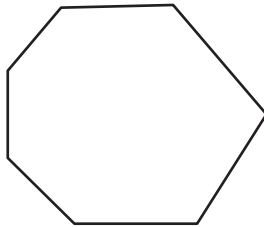
Not a member? Please sign up to gain complete access.

www.mathworksheets4kids.com

Number of sides

Polygon type

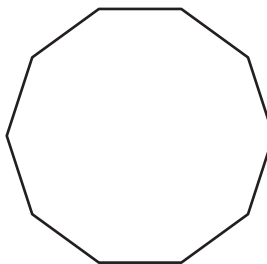
5)



Number of sides

Polygon type

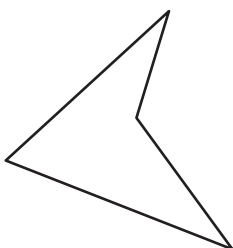
7)



Number of sides

Polygon type

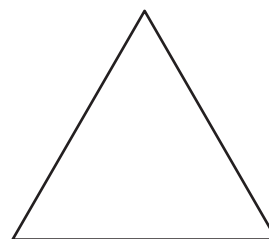
9)



Number of sides

Polygon type

10)



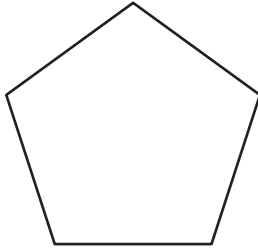
Number of sides

Polygon type

Types of Polygons

Write the number of sides and name each polygon.

1)



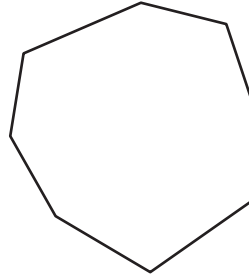
Number of sides

5

Polygon type

Pentagon

2)



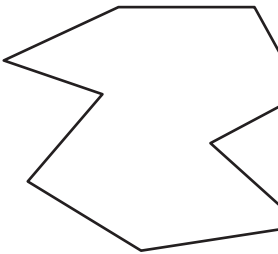
Number of sides

8

Polygon type

Octagon

3)



4)

PREVIEW

Gain complete access to the largest collection of worksheets in all subjects!

Members, please log in to download this worksheet.

Not a member? Please sign up to gain complete access.

www.mathworksheets4kids.com

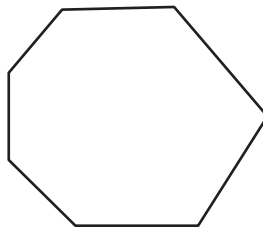
Number of sides

4

Polygon type

Quadrilateral

5)



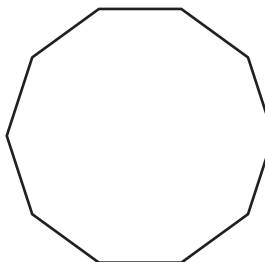
Number of sides

6

Polygon type

Hexagon

7)



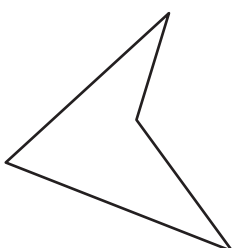
Number of sides

5

Polygon type

Pentagon

9)



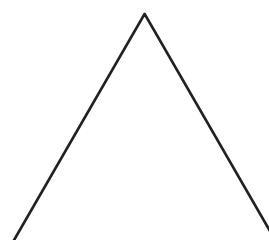
Number of sides

4

Polygon type

Quadrilateral

10)



Number of sides

3

Polygon type

Triangle