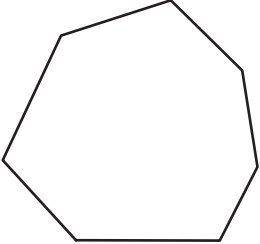
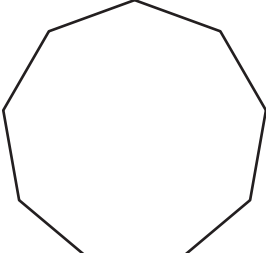
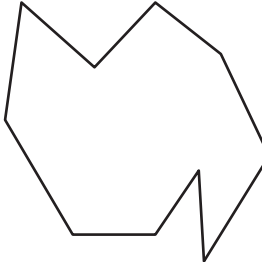



# Types of Polygons

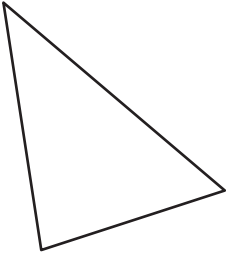
Write the number of sides and name each polygon.

1)  Number of sides \_\_\_\_\_  
Polygon type \_\_\_\_\_

2)  Number of sides \_\_\_\_\_  
Polygon type \_\_\_\_\_

3) 

4)  Number of sides \_\_\_\_\_  
Polygon type \_\_\_\_\_

5) 

## PREVIEW

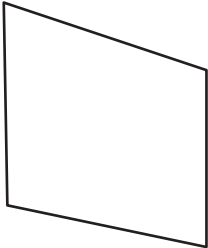
Gain complete access to the largest collection of worksheets in all subjects!

Members, please log in to download this worksheet.

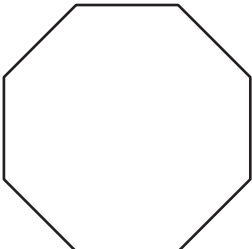
Not a member? Please sign up to gain complete access.

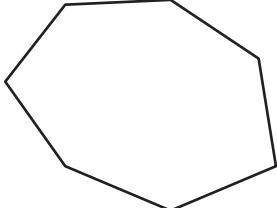
[www.mathworksheets4kids.com](http://www.mathworksheets4kids.com)

Number of sides \_\_\_\_\_  
Polygon type \_\_\_\_\_

7) 

Number of sides \_\_\_\_\_  
Polygon type \_\_\_\_\_

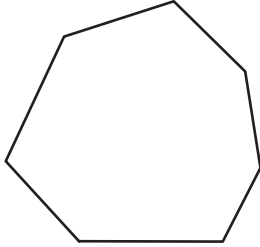
9)  Number of sides \_\_\_\_\_  
Polygon type \_\_\_\_\_

10)  Number of sides \_\_\_\_\_  
Polygon type \_\_\_\_\_

**Types of Polygons**

Write the number of sides and name each polygon.

1)



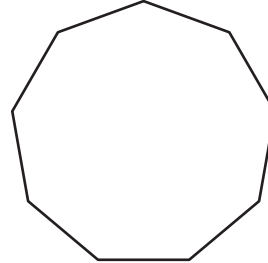
Number of sides

7

Polygon type

Heptagon

2)



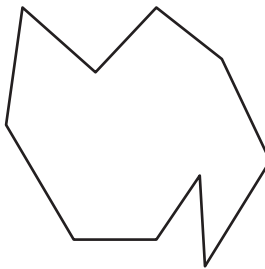
Number of sides

9

Polygon type

Nonagon

3)



Number of sides

8

Polygon type

Octagon

4)



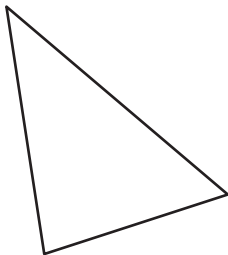
Number of sides

5

Polygon type

Pentagon

5)



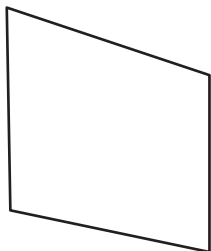
Number of sides

6

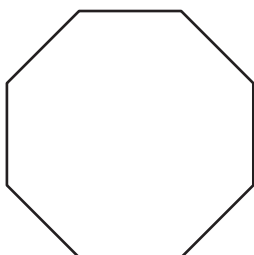
Polygon type

Hexagon

7)

Quadrilateral

9)



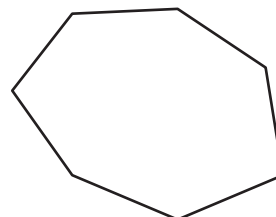
Number of sides

8

Polygon type

Octagon

10)



Number of sides

7

Polygon type

Heptagon