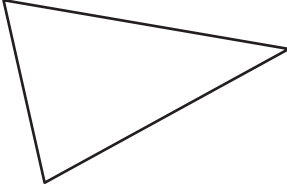
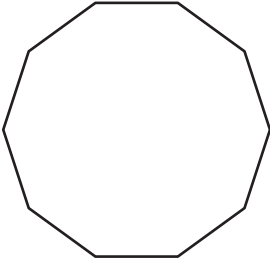



# Types of Polygons

Write the number of sides and name each polygon.

1)  Number of sides \_\_\_\_\_  
 Polygon type \_\_\_\_\_

2)  Number of sides \_\_\_\_\_  
 Polygon type \_\_\_\_\_

3) 


**PREVIEW**

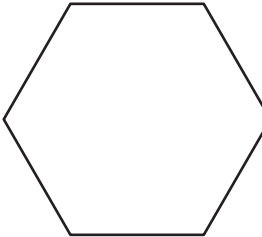
Gain complete access to the largest collection of worksheets in all subjects!

Members, please log in to download this worksheet.

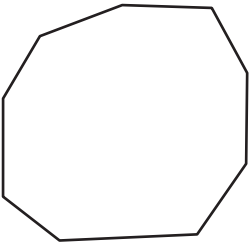
Not a member? Please sign up to gain complete access.

[www.mathworksheets4kids.com](http://www.mathworksheets4kids.com)


4)  Number of sides \_\_\_\_\_  
 Polygon type \_\_\_\_\_

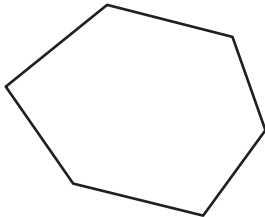
5) 

Number of sides \_\_\_\_\_  
 Polygon type \_\_\_\_\_

7) 

Number of sides \_\_\_\_\_  
 Polygon type \_\_\_\_\_

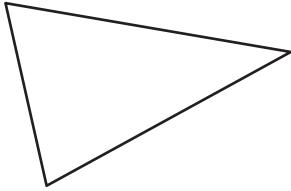
9)  Number of sides \_\_\_\_\_  
 Polygon type \_\_\_\_\_

10)  Number of sides \_\_\_\_\_  
 Polygon type \_\_\_\_\_

**Types of Polygons**

Write the number of sides and name each polygon.

1)



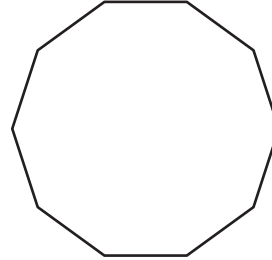
Number of sides

3

Polygon type

Triangle

2)



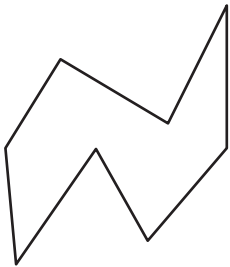
Number of sides

10

Polygon type

Decagon

3)



Number of sides

5

Polygon type

Pentagon

4)

# PREVIEW

Gain complete access to the largest collection of worksheets in all subjects!

Members, please log in to download this worksheet.

Not a member? Please sign up to gain complete access.

[www.mathworksheets4kids.com](http://www.mathworksheets4kids.com)

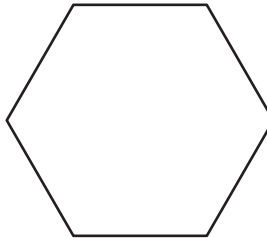
Number of sides

5

Polygon type

Pentagon

5)



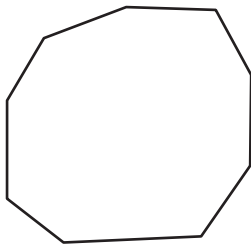
Number of sides

7

Polygon type

Heptagon

7)




Number of sides

4

Polygon type

QuadrilateralNonagon

9)



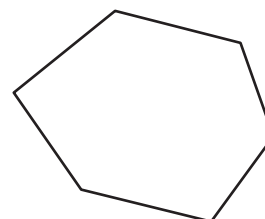
Number of sides

5

Polygon type

Pentagon

10)



Number of sides

6

Polygon type

Hexagon