
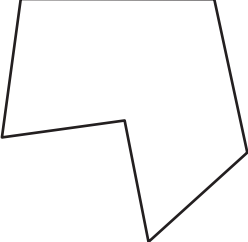
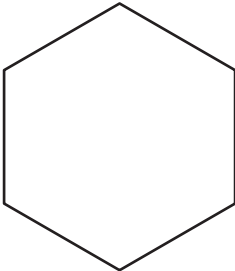



Types of Polygons

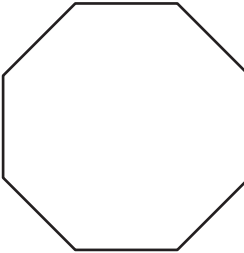
Write the number of sides and name each polygon.

1)  Number of sides _____
 Polygon type _____

2)  Number of sides _____
 Polygon type _____

3) 

4)  Number of sides _____
 Polygon type _____

5) 


PREVIEW

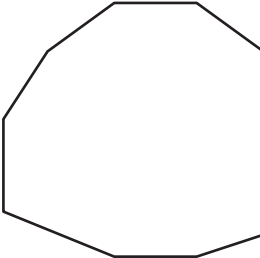
Gain complete access to the largest collection of worksheets in all subjects!


Members, please log in to download this worksheet.

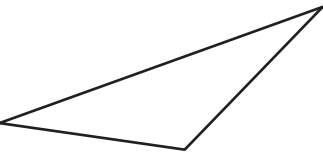
Not a member? Please sign up to gain complete access.

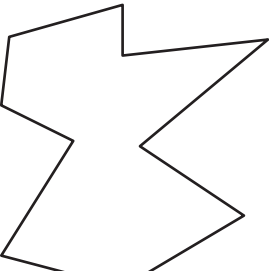
www.mathworksheets4kids.com

6)  Number of sides _____
 Polygon type _____

7) 

8)  Number of sides _____
 Polygon type _____


9)  Number of sides _____
 Polygon type _____

10)  Number of sides _____
 Polygon type _____

Types of Polygons

Write the number of sides and name each polygon.

1)



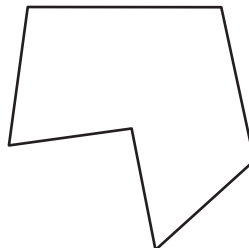
Number of sides

4

Polygon type

Quadrilateral

2)



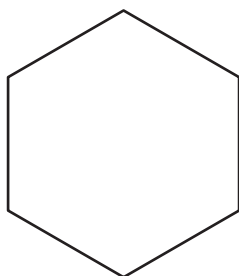
Number of sides

6

Polygon type

Hexagon

3)



Number of sides

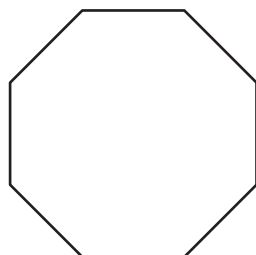
8

Polygon type

Octagon

4)

5)



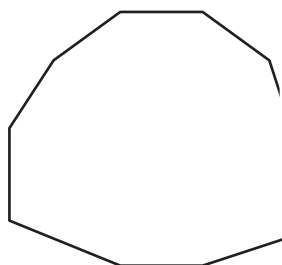
Number of sides

5

Polygon type

Pentagon

7)



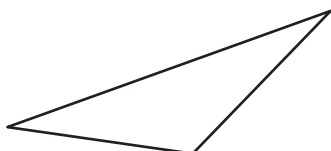
Number of sides

7

Polygon type

Heptagon

9)



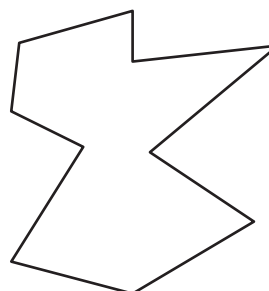
Number of sides

3

Polygon type

Triangle

10)



Number of sides

10

Polygon type

Decagon

PREVIEW

Gain complete access to the largest collection of worksheets in all subjects!

Members, please log in to download this worksheet.

Not a member? Please sign up to gain complete access.

www.mathworksheets4kids.com

Decagon