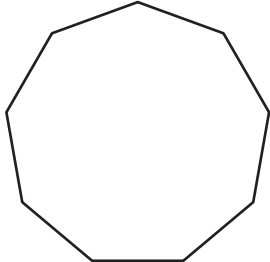
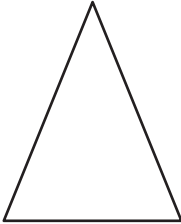
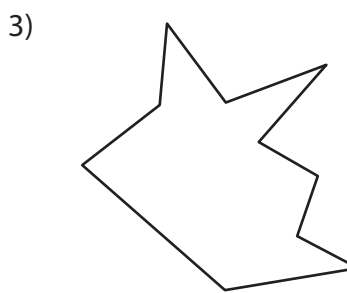



Types of Polygons

Write the number of sides and name each polygon.

1)  Number of sides _____
 Polygon type _____

2)  Number of sides _____
 Polygon type _____



4) 

PREVIEW

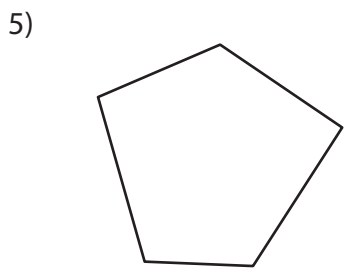
Gain complete access to the largest collection of worksheets in all subjects!

Members, please log in to download this worksheet.

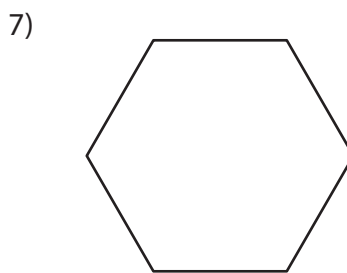
Not a member? Please sign up to gain complete access.

www.mathworksheets4kids.com


Number of sides _____
 Polygon type _____

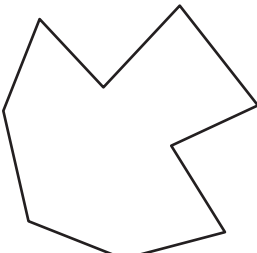


Number of sides _____
 Polygon type _____



Number of sides _____
 Polygon type _____

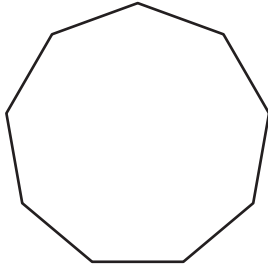
9)  Number of sides _____
 Polygon type _____

10)  Number of sides _____
 Polygon type _____

Types of Polygons

Write the number of sides and name each polygon.

1)



Number of sides

9

Polygon type

Nonagon

2)



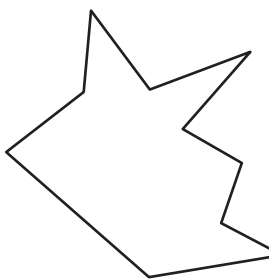
Number of sides

3

Polygon type

Triangle

3)



Number of sides

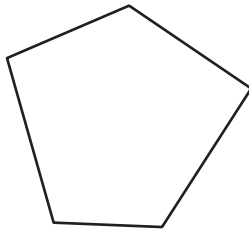
7

Polygon type

Heptagon

4)

5)



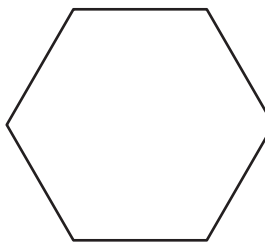
Number of sides

4

Polygon type

Quadrilateral

7)




Number of sides

8

Polygon type

Octagon

9)



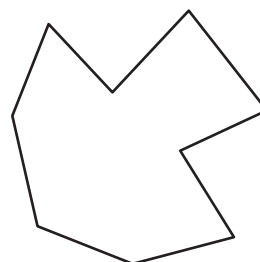
Number of sides

4

Polygon type

Quadrilateral

10)



Number of sides

9

Polygon type

Nonagon

PREVIEW

Gain complete access to the largest collection of worksheets in all subjects!

Members, please log in to download this worksheet.

Not a member? Please sign up to gain complete access.

www.mathworksheets4kids.com

Hexagon