



Name : \_\_\_\_\_


# Types of Polygons


Irregular-concave: S2

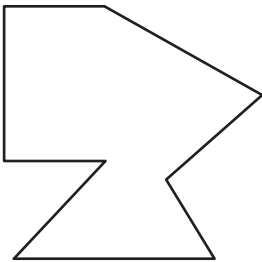
Write the number of sides and name each polygon.


1)  Number of sides \_\_\_\_\_  
Polygon type \_\_\_\_\_

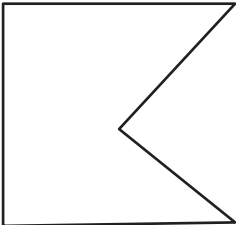
2)  Number of sides \_\_\_\_\_  
Polygon type \_\_\_\_\_


3) 

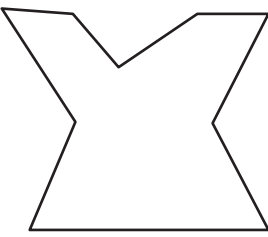
4)  Number of sides \_\_\_\_\_  
Polygon type \_\_\_\_\_

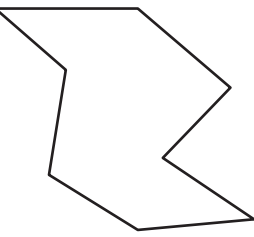
5) 

6)  Number of sides \_\_\_\_\_  
Polygon type \_\_\_\_\_

7) 

8)  Number of sides \_\_\_\_\_  
Polygon type \_\_\_\_\_

9)  Number of sides \_\_\_\_\_  
Polygon type \_\_\_\_\_

10)  Number of sides \_\_\_\_\_  
Polygon type \_\_\_\_\_

**PREVIEW**

Gain complete access to the largest collection of worksheets in all subjects!


Members, please log in to download this worksheet.

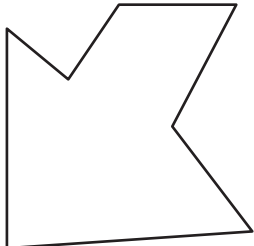
Not a member? Please sign up to gain complete access.


[www.mathworksheets4kids.com](http://www.mathworksheets4kids.com)


**Types of Polygons**

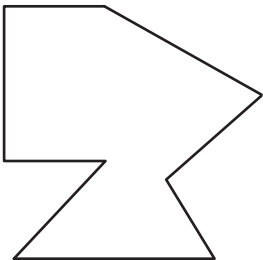
Write the number of sides and name each polygon.

1)  Number of sides  
6  
Polygon type  
Hexagon

2)  Number of sides  
7  
Polygon type  
Heptagon

3) 

4)  Number of sides  
4  
Polygon type  
Quadrilateral

5) 

**PREVIEW**

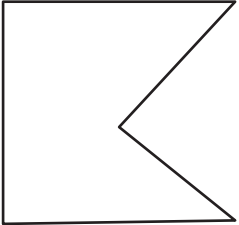
Gain complete access to the largest collection of worksheets in all subjects!

Members, please log in to download this worksheet.

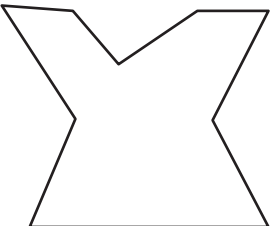
Not a member? Please sign up to gain complete access.

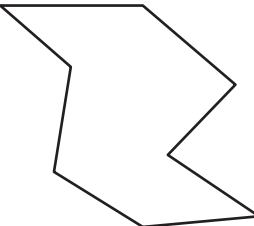
[www.mathworksheets4kids.com](http://www.mathworksheets4kids.com)

Number of sides  
6  
Polygon type  
Hexagon

7) 

Number of sides  
10  
Polygon type  
Decagon

9)  Number of sides  
9  
Polygon type  
Nonagon

10)  Number of sides  
8  
Polygon type  
Octagon