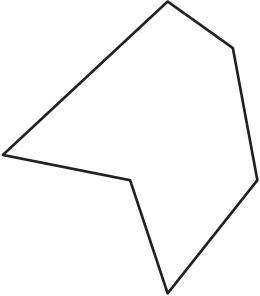


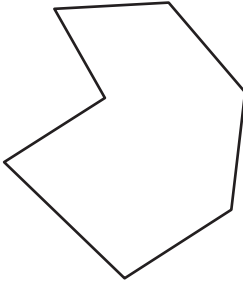
Name : _____

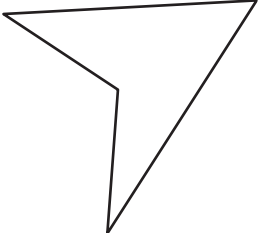
Types of Polygons


Irregular-concave: S4

Write the number of sides and name each polygon.


1)  Number of sides _____
Polygon type _____

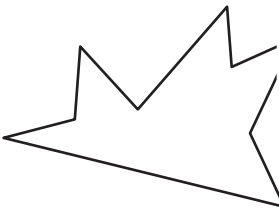
2)  Number of sides _____
Polygon type _____


3) 

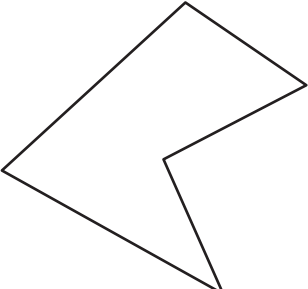
4)  Number of sides _____
Polygon type _____


5) 

6)  Number of sides _____
Polygon type _____

7) 

8)  Number of sides _____
Polygon type _____

9)  Number of sides _____
Polygon type _____

10)  Number of sides _____
Polygon type _____

PREVIEW

Gain complete access to the largest collection of worksheets in all subjects!

Members, please log in to download this worksheet.

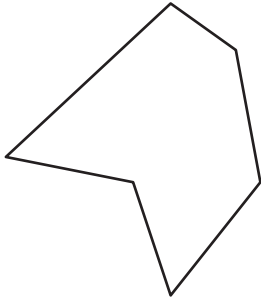
Not a member? Please sign up to gain complete access.

www.mathworksheets4kids.com

Types of Polygons

Write the number of sides and name each polygon.

1)



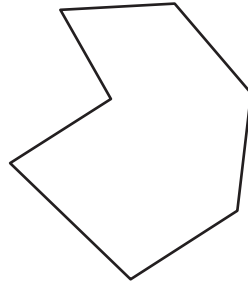
Number of sides

6

Polygon type

Hexagon

2)



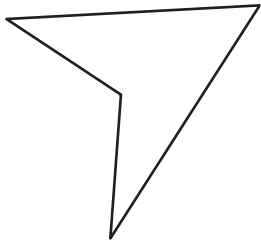
Number of sides

7

Polygon type

Heptagon

3)



Number of sides

5

Polygon type

Pentagon

4)

PREVIEW

Gain complete access to the largest collection of worksheets in all subjects!

Members, please log in to download this worksheet.

Not a member? Please sign up to gain complete access.

www.mathworksheets4kids.com

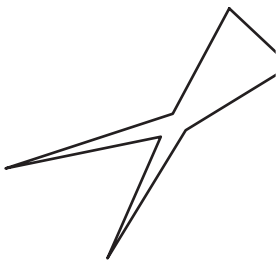
Number of sides

8

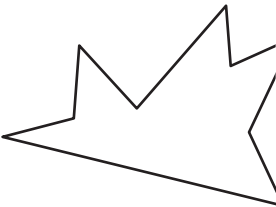
Polygon type

Octagon

5)



7)



Nonagon

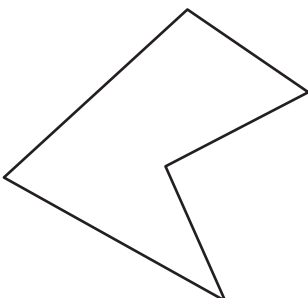
Number of sides

6

Polygon type

Hexagon

9)




Number of sides

5

Polygon type

Pentagon

10)



Number of sides

10

Polygon type

Decagon