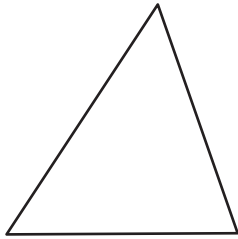


Types of Polygons

Write the number of sides and name each polygon.

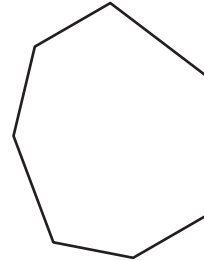
1)



Number of sides

Polygon type

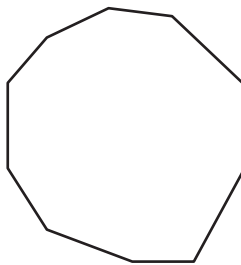
2)



Number of sides

Polygon type

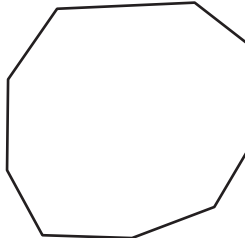
3)



Number of sides

Polygon type

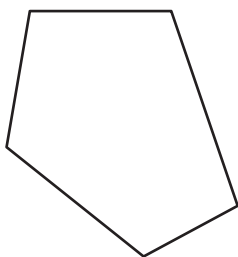
5)



Number of sides

Polygon type

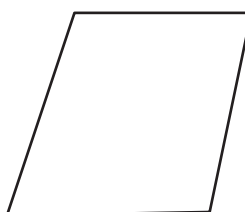
7)



Number of sides

Polygon type

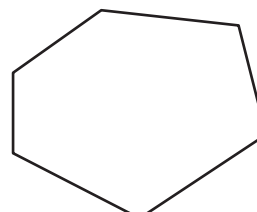
9)



Number of sides

Polygon type

10)



Number of sides

Polygon type

PREVIEW

Gain complete access to the largest collection of worksheets in all subjects!

Members, please log in to download this worksheet.

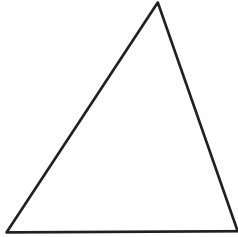
Not a member? Please sign up to gain complete access.

www.mathworksheets4kids.com

Types of Polygons

Write the number of sides and name each polygon.

1)



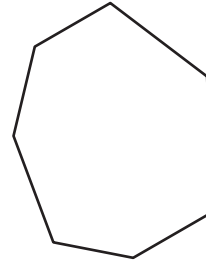
Number of sides

3

Polygon type

Triangle

2)



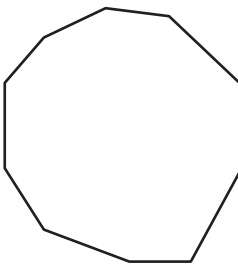
Number of sides

7

Polygon type

Heptagon

3)



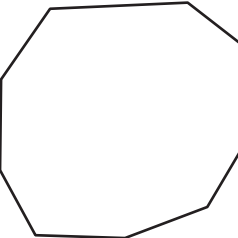
Number of sides

4

Polygon type

Quadrilateral

5)



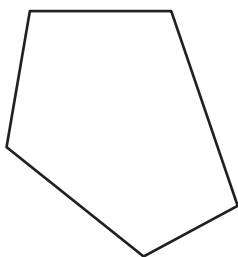
Number of sides

8

Polygon type

Octagon

7)



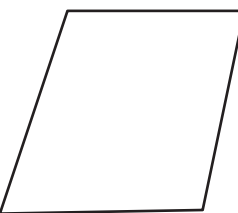
Number of sides

10

Polygon type

Decagon

9)



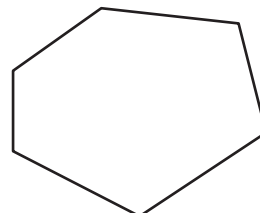
Number of sides

4

Polygon type

Quadrilateral

10)



Number of sides

6

Polygon type

Hexagon

PREVIEW

Gain complete access to the largest collection of worksheets in all subjects!

Members, please log in to download this worksheet.

Not a member? Please sign up to gain complete access.

www.mathworksheets4kids.com

Pentagon