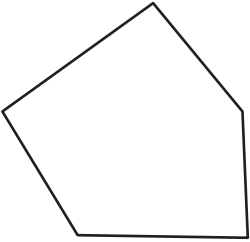


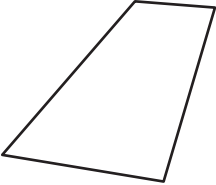
Name : \_\_\_\_\_

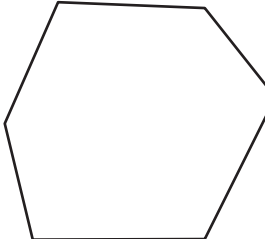
# Types of Polygons


Irregular-convex: S4

Write the number of sides and name each polygon.

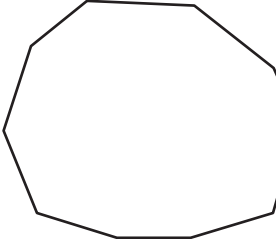
1)  Number of sides \_\_\_\_\_  
Polygon type \_\_\_\_\_

2)  Number of sides \_\_\_\_\_  
Polygon type \_\_\_\_\_

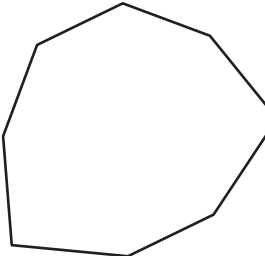
3) 

4)   
**PREVIEW**  
Gain complete access to the largest collection of worksheets in all subjects!  
Members, please log in to download this worksheet.  
Not a member? Please sign up to gain complete access.  
[www.mathworksheets4kids.com](http://www.mathworksheets4kids.com)

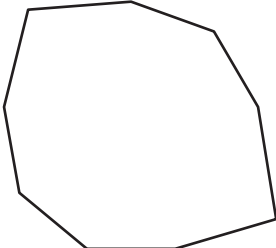
Number of sides \_\_\_\_\_  
Polygon type \_\_\_\_\_

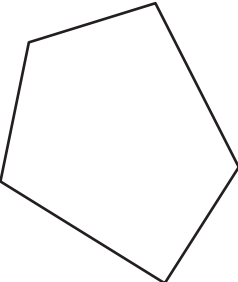
5) 

Number of sides \_\_\_\_\_  
Polygon type \_\_\_\_\_

7) 

Number of sides \_\_\_\_\_  
Polygon type \_\_\_\_\_

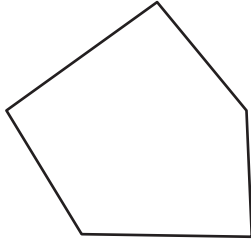
9)  Number of sides \_\_\_\_\_  
Polygon type \_\_\_\_\_

10)  Number of sides \_\_\_\_\_  
Polygon type \_\_\_\_\_

**Types of Polygons**

Write the number of sides and name each polygon.

1)



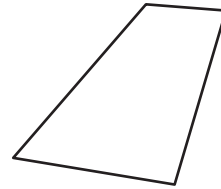
Number of sides

5

Polygon type

Pentagon

2)



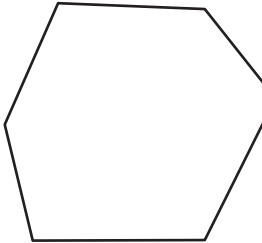
Number of sides

4

Polygon type

Quadrilateral

3)



Number of sides

9

Polygon type

Nonagon

4)



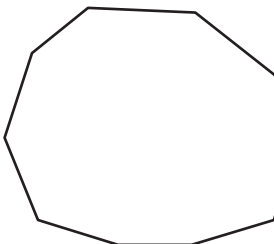
Number of sides

7

Polygon type

Heptagon

5)



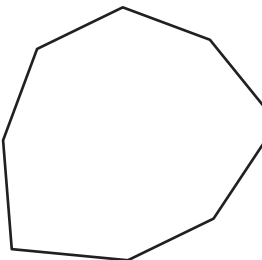
Number of sides

3

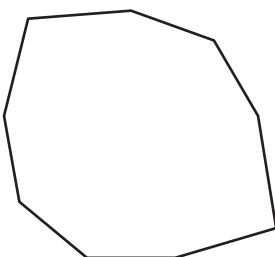
Polygon type

Triangle

7)

Octagon

9)



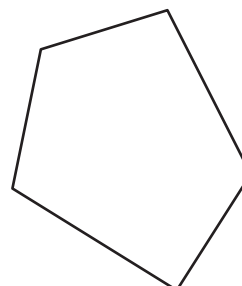
Number of sides

9

Polygon type

Nonagon

10)



Number of sides

5

Polygon type

Pentagon**PREVIEW**

Gain complete access to the largest collection of worksheets in all subjects!

Members, please log in to download this worksheet.

Not a member? Please sign up to gain complete access.

[www.mathworksheets4kids.com](http://www.mathworksheets4kids.com)