

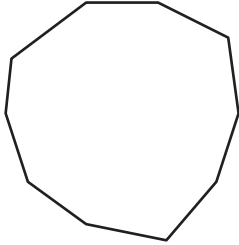
Name : _____

Types of Polygons

Irregular-convex: S5

Write the number of sides and name each polygon.

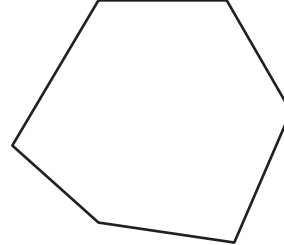
1)



Number of sides

Polygon type

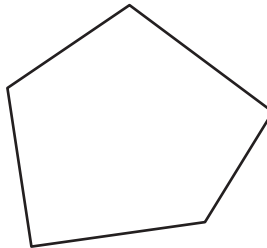
2)



Number of sides

Polygon type

3)



Number of sides

Polygon type

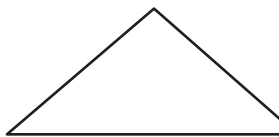
4)



Number of sides

Polygon type

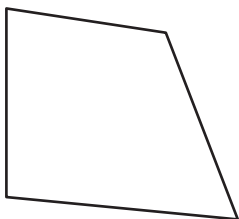
5)



Number of sides

Polygon type

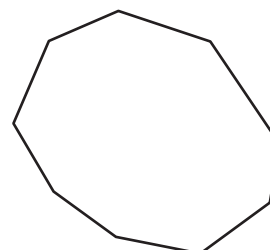
7)



Number of sides

Polygon type

10)



Number of sides

Polygon type

PREVIEW

Gain complete access to the largest collection of worksheets in all subjects!

Members, please log in to download this worksheet.

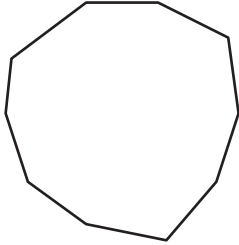
Not a member? Please sign up to gain complete access.

www.mathworksheets4kids.com

Types of Polygons

Write the number of sides and name each polygon.

1)



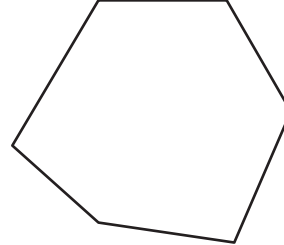
Number of sides

10

Polygon type

Decagon

2)



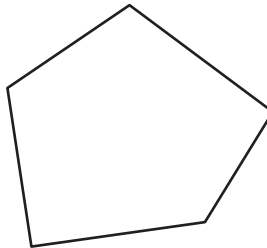
Number of sides

6

Polygon type

Hexagon

3)



Number of sides

7

Polygon type

Heptagon

4)



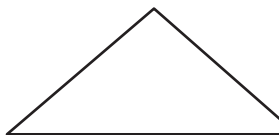
Number of sides

4

Polygon type

Quadrilateral

5)



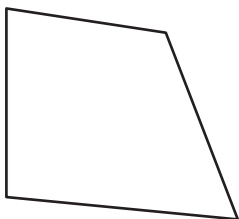
Number of sides

8

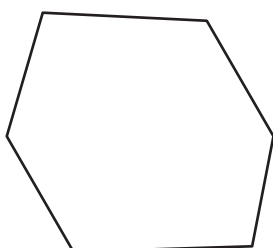
Polygon type

Octagon

7)

**Quadrilateral**

9)



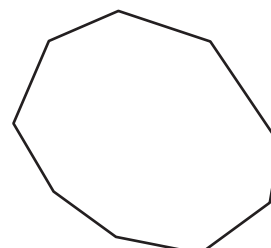
Number of sides

6

Polygon type

Hexagon

10)



Number of sides

9

Polygon type

Nonagon

PREVIEW

Gain complete access to the largest collection of worksheets in all subjects!

Members, please log in to download this worksheet.

Not a member? Please sign up to gain complete access.

www.mathworksheets4kids.com