

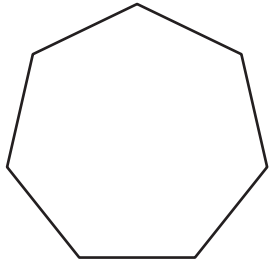
Name : _____

Regular: S1

Types of Polygons

Write the number of sides and name each polygon.

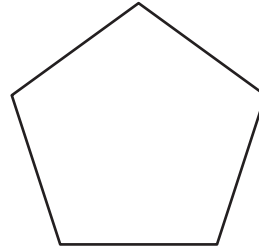
1)



Number of sides

Polygon type

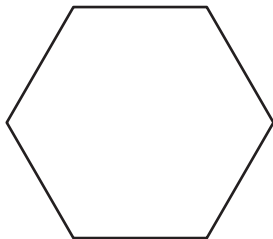
2)



Number of sides

Polygon type

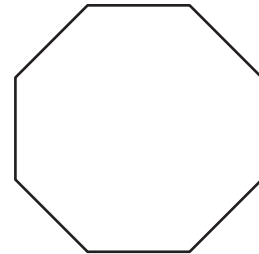
3)



Number of sides

Polygon type


4)



Number of sides

Polygon type

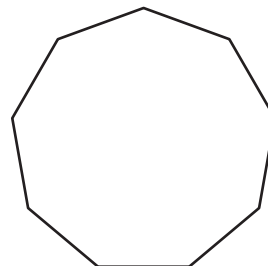
5)



Number of sides

Polygon type

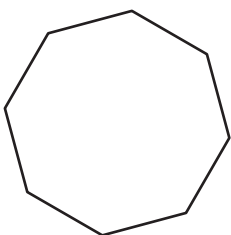
6)



Number of sides

Polygon type

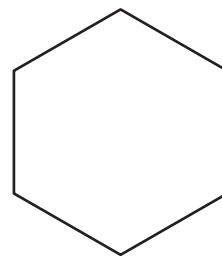
7)



Number of sides

Polygon type

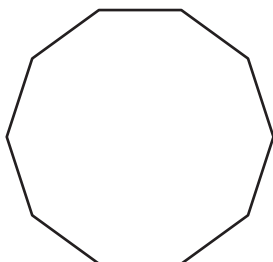
8)



Number of sides

Polygon type

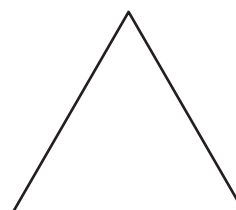
9)



Number of sides

Polygon type

10)



Number of sides

Polygon type

Name : _____

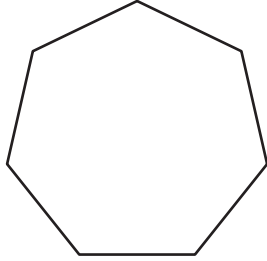
Answer key

Regular: S1

Types of Polygons

Write the number of sides and name each polygon.

1)



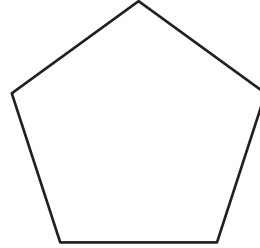
Number of sides

7

Polygon type

Heptagon

2)



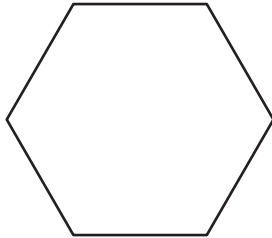
Number of sides

5

Polygon type

Pentagon

3)



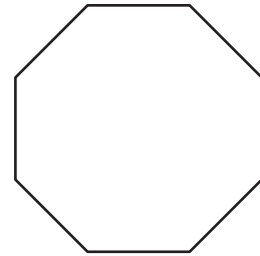
Number of sides

6

Polygon type

Hexagon

4)



Number of sides

8

Polygon type

Octagon

5)



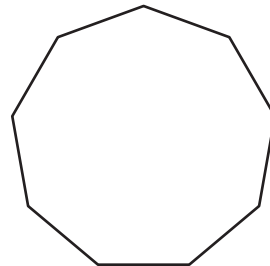
Number of sides

4

Polygon type

Quadrilateral

6)



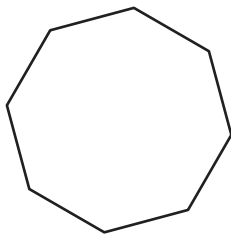
Number of sides

9

Polygon type

Nonagon

7)



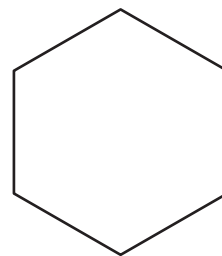
Number of sides

8

Polygon type

Octagon

8)



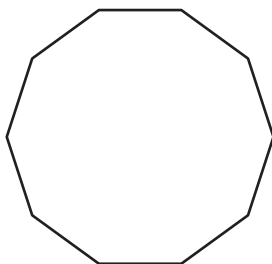
Number of sides

6

Polygon type

Hexagon

9)



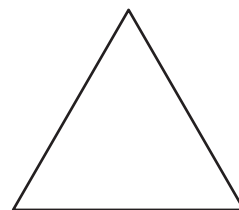
Number of sides

10

Polygon type

Decagon

10)



Number of sides

3

Polygon type

Triangle