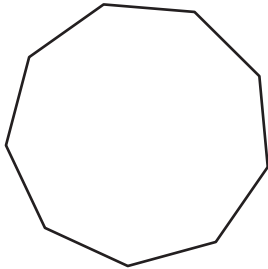
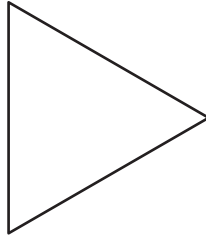




Types of Polygons

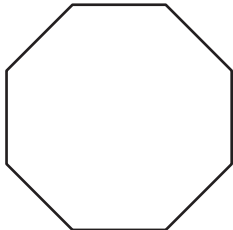
Write the number of sides and name each polygon.

1)  Number of sides _____
Polygon type _____

2)  Number of sides _____
Polygon type _____

3) 

4)  Number of sides _____
Polygon type _____

5) 


PREVIEW

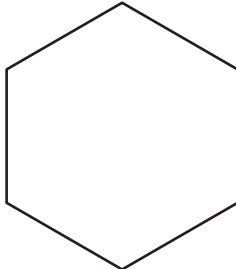
Gain complete access to the largest collection of worksheets in all subjects!


Members, please log in to download this worksheet.

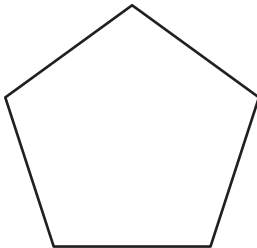
Not a member? Please sign up to gain complete access.

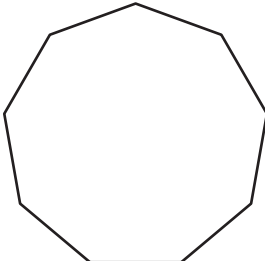
www.mathworksheets4kids.com

6)  Number of sides _____
Polygon type _____

7) 

8)  Number of sides _____
Polygon type _____

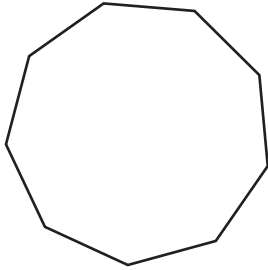
9)  Number of sides _____
Polygon type _____

10)  Number of sides _____
Polygon type _____

Types of Polygons

Write the number of sides and name each polygon.

1)



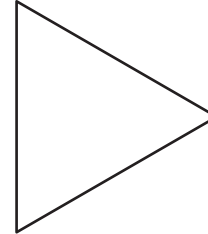
Number of sides

9

Polygon type

Nonagon

2)




Number of sides

3

Polygon type

Triangle

3)



4)

PREVIEW

Gain complete access to the largest collection of worksheets in all subjects!

Members, please log in to download this worksheet.

Not a member? Please sign up to gain complete access.

www.mathworksheets4kids.com

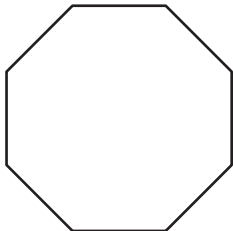
Number of sides

7

Polygon type

Heptagon

5)



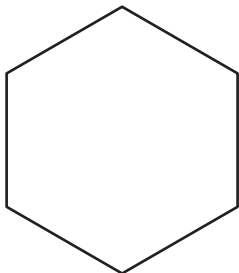
Number of sides

5

Polygon type

Pentagon

7)



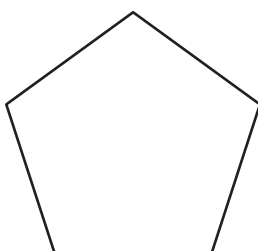
Number of sides

10

Polygon type

Decagon

9)



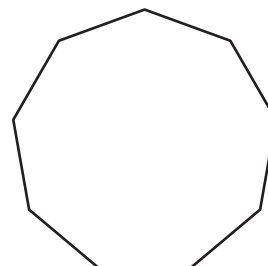
Number of sides

5

Polygon type

Pentagon

10)



Number of sides

9

Polygon type

Nonagon