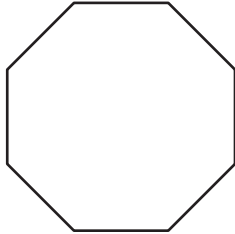


Types of Polygons

Write the number of sides and name each polygon.


1)



Number of sides

Polygon type

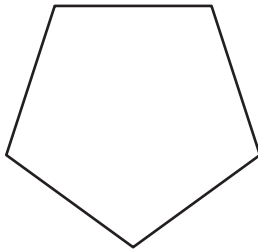
2)



Number of sides

Polygon type

3)



4)

PREVIEW

Gain complete access to the largest collection of worksheets in all subjects!

Members, please log in to download this worksheet.

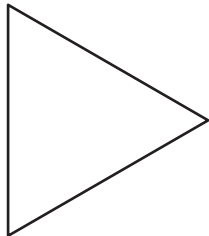
Not a member? Please sign up to gain complete access.

www.mathworksheets4kids.com

Number of sides

Polygon type

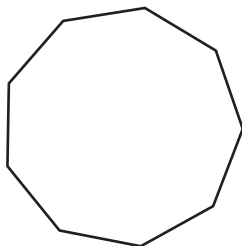
5)



Number of sides

Polygon type

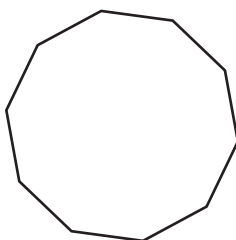
7)



Number of sides

Polygon type

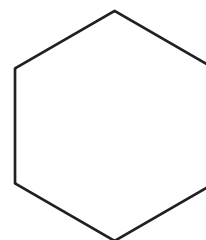
9)



Number of sides

Polygon type

10)

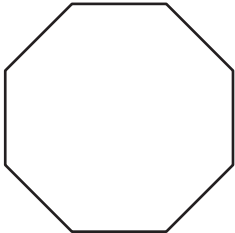



Number of sides

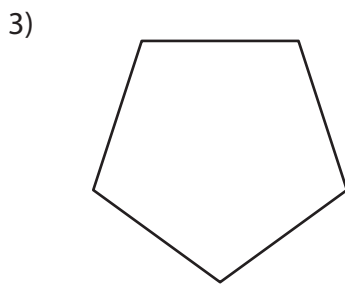
Polygon type


Types of Polygons

Write the number of sides and name each polygon.

1)  Number of sides
8
Polygon type
Octagon

2)  Number of sides
4
Polygon type
Quadrilateral



4) 

PREVIEW

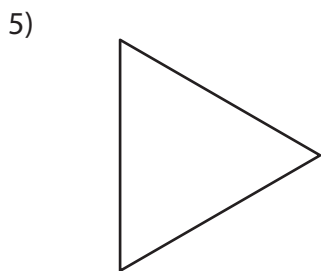
Gain complete access to the largest collection of worksheets in all subjects!

Members, please log in to download this worksheet.

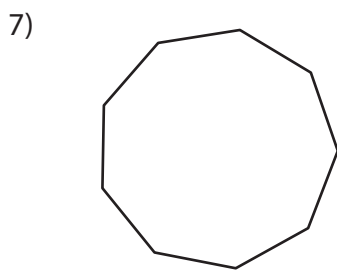
Not a member? Please sign up to gain complete access.

www.mathworksheets4kids.com

Number of sides
10
Polygon type
Decagon

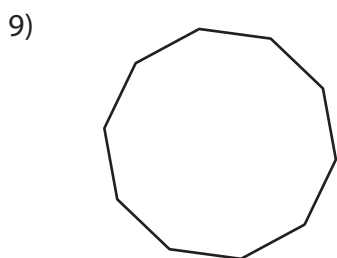


Number of sides
7
Polygon type
Heptagon

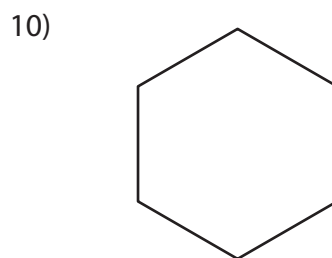


Nonagon

Number of sides
3
Polygon type
Triangle



Number of sides
10
Polygon type
Decagon



Number of sides
6
Polygon type
Hexagon