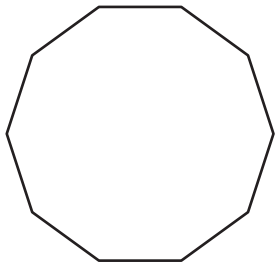
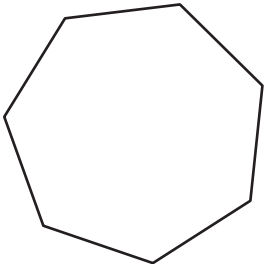
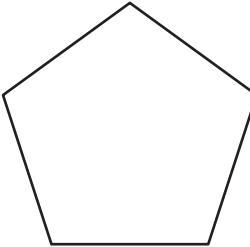



Types of Polygons

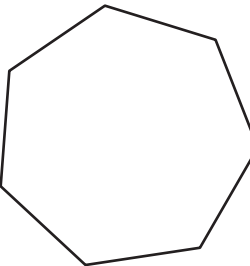
Write the number of sides and name each polygon.


1)  Number of sides _____
 Polygon type _____

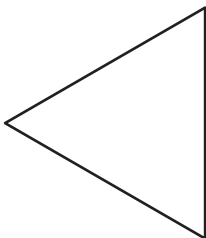
2)  Number of sides _____
 Polygon type _____


3) 

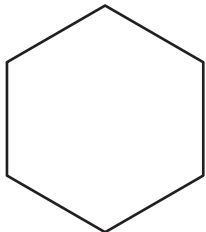
4)  Number of sides _____
 Polygon type _____

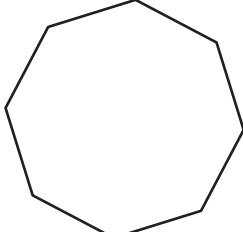
5) 

6)  Number of sides _____
 Polygon type _____

7) 

8)  Number of sides _____
 Polygon type _____

9)  Number of sides _____
 Polygon type _____

10)  Number of sides _____
 Polygon type _____

PREVIEW

Gain complete access to the largest collection of worksheets in all subjects!

Members, please log in to download this worksheet.

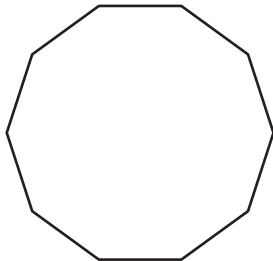
Not a member? Please sign up to gain complete access.

www.mathworksheets4kids.com

Types of Polygons

Write the number of sides and name each polygon.

1)



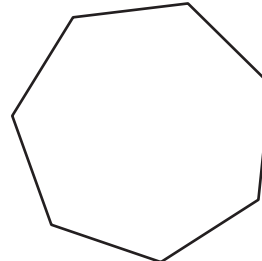
Number of sides

10

Polygon type

Decagon

2)



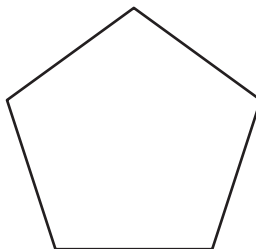
Number of sides

7

Polygon type

Heptagon

3)



4)

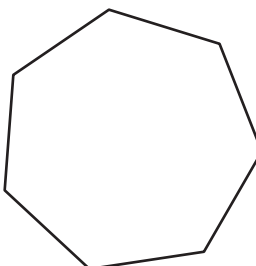
Number of sides

4

Polygon type

Quadrilateral

5)



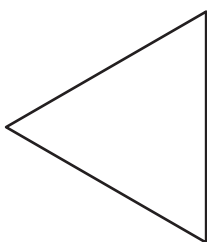
Number of sides

9

Polygon type

Nonagon

7)



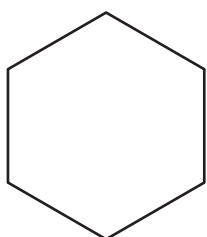
Number of sides

5

Polygon type

Pentagon

9)



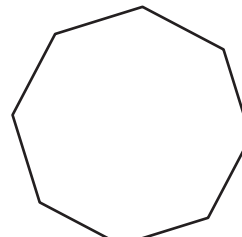
Number of sides

6

Polygon type

Hexagon

10)



Number of sides

8

Polygon type

Octagon**PREVIEW**Gain complete access to the largest
collection of worksheets in all subjects!Members, please
log in to
download this
worksheet.Not a member?
Please sign up to
gain complete
access.www.mathworksheets4kids.com**Triangle**