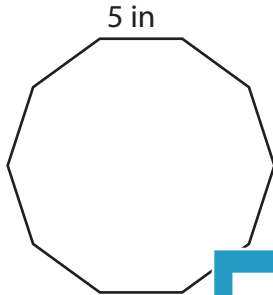


**Polygon-Perimeter**

ES2

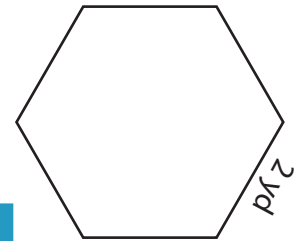
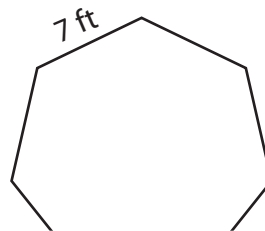
Find the perimeter of each polygon.

1)



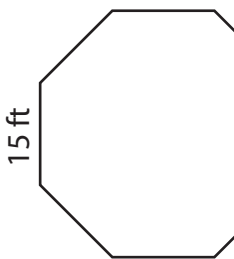
Perimeter =

2)

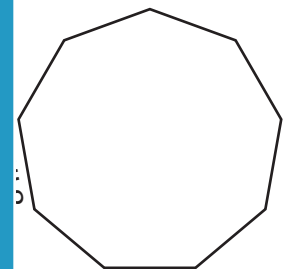


Perimeter =

4)

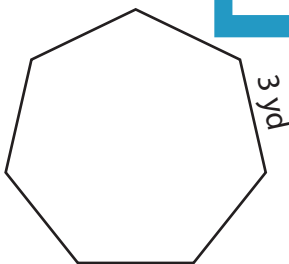


Perimeter =

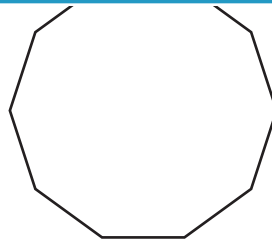


Perimeter =

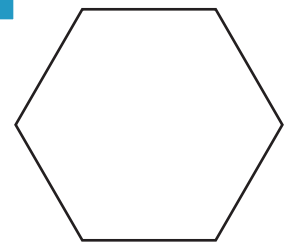
7)



Perimeter =



Perimeter =



Perimeter =

**PREVIEW**

Access the largest collection of worksheets for just **\$19.95** per year!

Members, please log in to download this worksheet. **Log in**

Not a member? Please sign up to gain complete access. **Sign up**

[www.mathworksheets4kids.com](http://www.mathworksheets4kids.com)

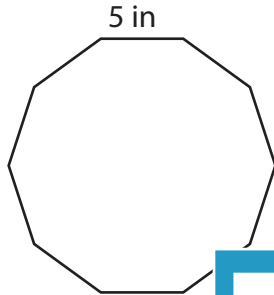
**Answer key**

**Polygon-Perimeter**

ES2

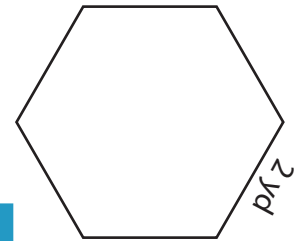
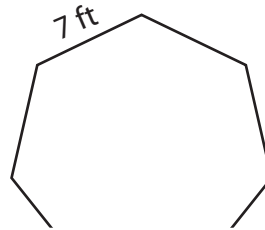
Find the perimeter of each polygon.

1)



Perimeter = **50 in**

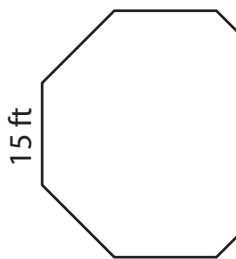
2)



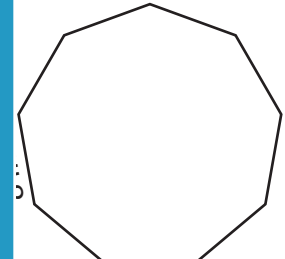
3)

Perimeter = **12 yd**

4)

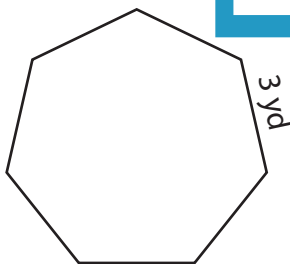


Perimeter = **120 ft**

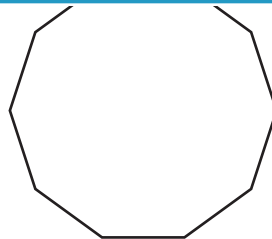


Perimeter = **72 in**

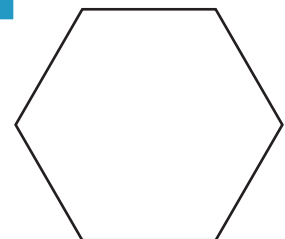
7)



Perimeter = **21 yd**



Perimeter = **10 in**



Perimeter = **66 ft**

**PREVIEW**

Access the largest collection of worksheets for just **\$19.95** per year!

Members, please log in to download this worksheet.

**Log in**

Not a member? Please sign up to gain complete access.

**Sign up**

[www.mathworksheets4kids.com](http://www.mathworksheets4kids.com)