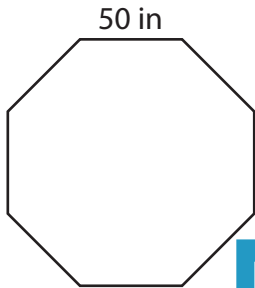


Polygon-Perimeter

MS3

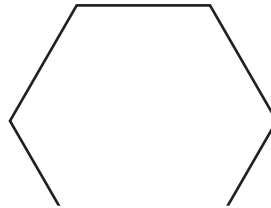
Find the perimeter of each polygon.

1)

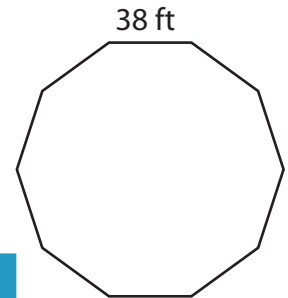


Perimeter =

2)




3)

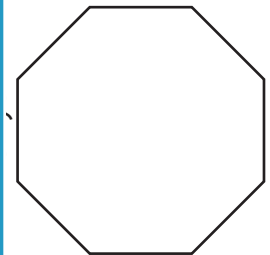


Perimeter =

4)

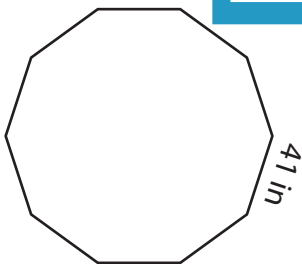


Perimeter =

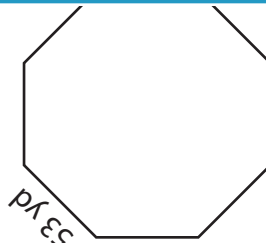


Perimeter =

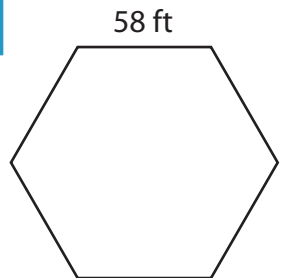
7)



Perimeter =



Perimeter =



Perimeter =

PREVIEW

Access the largest collection of
worksheets for just **\$19.95** per year!

Members, please
log in to
download this
worksheet.

Log in

Not a member?
Please sign up to
gain complete
access.

Sign up

www.mathworksheets4kids.com

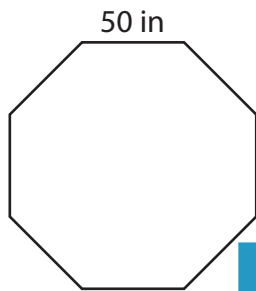
Answer key

Polygon-Perimeter

MS3

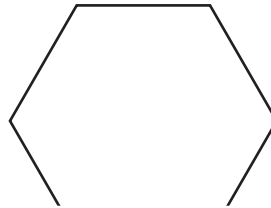
Find the perimeter of each polygon.

1)

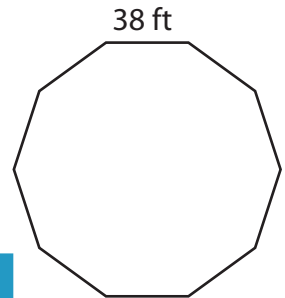


Perimeter = **400**

2)

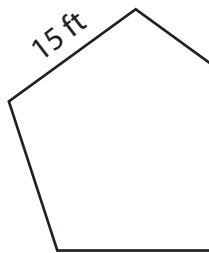


3)



Perimeter = **380 ft**

4)



Perimeter = **75**

Access the largest collection of worksheets for just **\$19.95** per year!

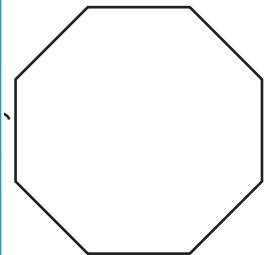
Members, please log in to download this worksheet.

Log in

Not a member? Please sign up to gain complete access.

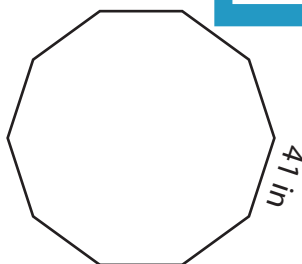
Sign up

www.mathworksheets4kids.com

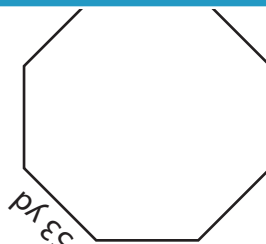


Perimeter = **256 yd**

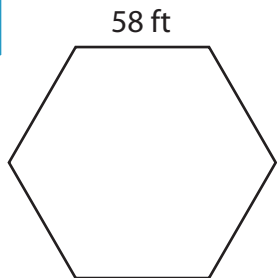
7)



Perimeter = **410 in**



Perimeter = **424 yd**



Perimeter = **348 ft**