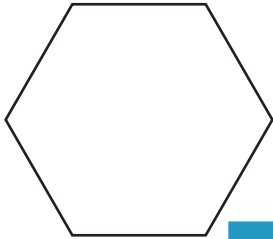


Polygon - Side Length

ES1

Calculate the length of the side of each polygon.

1)



Perimeter = _____
 Number of sides = _____
 Length of each side = _____

2)



PREVIEW

Access the largest collection of worksheets for just **\$19.95** per year!

Members, please log in to download this worksheet.

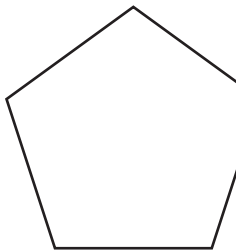
Log in

Not a member? Please sign up to gain complete access.

Sign up

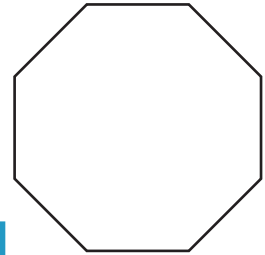
www.mathworksheets4kids.com

4)



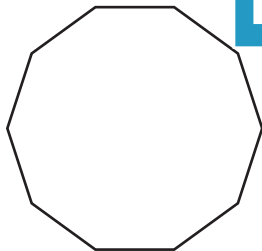
Perimeter = _____
 Number of sides = _____
 Length of each side = _____

3)

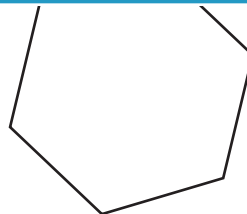


Perimeter = 32 yd
 Number of sides = _____
 Length of each side = _____

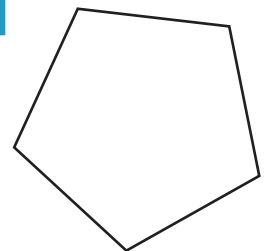
7)



Perimeter = 40 ft
 Number of sides = _____
 Length of each side = _____



Perimeter = 66 in
 Number of sides = _____
 Length of each side = _____



Perimeter = 15 yd
 Number of sides = _____
 Length of each side = _____

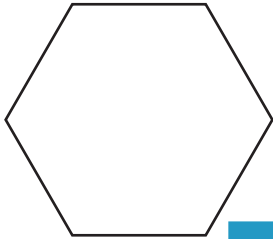
Answer key

Polygon - Side Length

ES1

Calculate the length of the side of each polygon.

1)

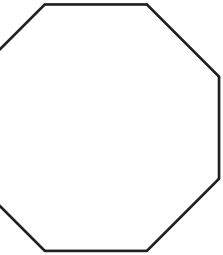


Perimeter = _____

Number of sides = _____

Length of each side = _____

2)

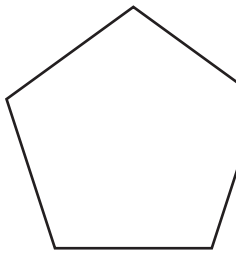


Perimeter = 32 yd

Number of sides = 8

Length of each side = 4 yd

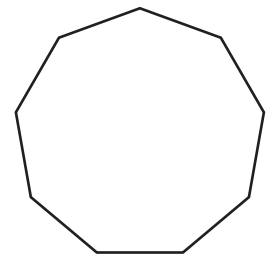
4)



Perimeter = _____

Number of sides = _____

Length of each side = _____

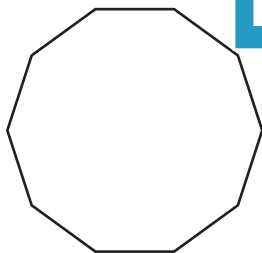


Perimeter = 72 ft

Number of sides = 9

Length of each side = 8 ft

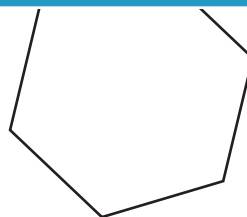
7)



Perimeter = 40 ft

Number of sides = 10

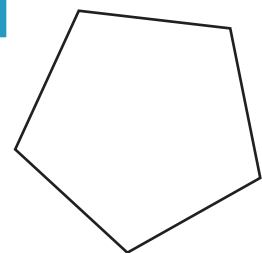
Length of each side = 4 ft



Perimeter = 66 in

Number of sides = 6

Length of each side = 11 in



Perimeter = 15 yd

Number of sides = 5

Length of each side = 3 yd

PREVIEW

Access the largest collection of worksheets for just **\$19.95** per year!

Members, please log in to download this worksheet.

Log in

Not a member? Please sign up to gain complete access.

Sign up

www.mathworksheets4kids.com