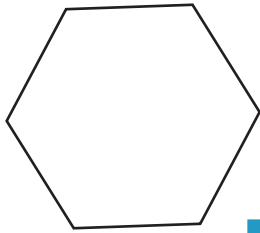


Polygon - Side Length

DS5

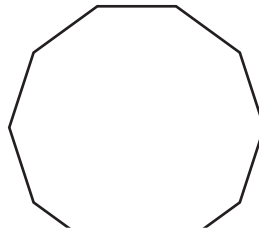
Calculate the length of the side of each polygon.

1)

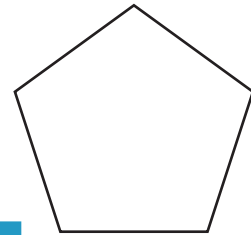


Perimeter = _____
 Number of sides = _____
 Length of each side = _____

2)

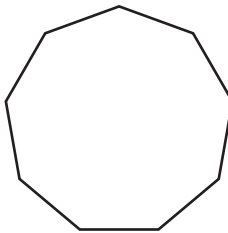


3)




Perimeter = 31.5 yd
 Number of sides = _____
 Length of each side = _____

4)

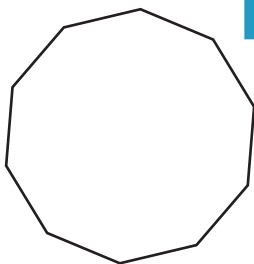


Perimeter = _____
 Number of sides = _____
 Length of each side = _____

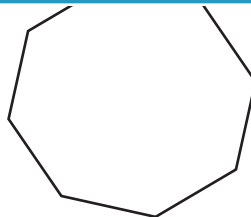


Perimeter = 55.6 in
 Number of sides = _____
 Length of each side = _____

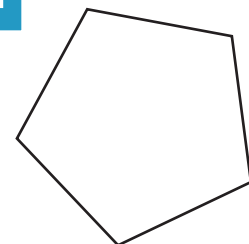
7)



Perimeter = 96 yd
 Number of sides = _____
 Length of each side = _____



Perimeter = 70.4 in
 Number of sides = _____
 Length of each side = _____



Perimeter = 63 ft
 Number of sides = _____
 Length of each side = _____

PREVIEW

Access the largest collection of
worksheets for just **\$19.95** per year!

Members, please
log in to
download this
worksheet.

Log in

Not a member?
Please sign up to
gain complete
access.

Sign up

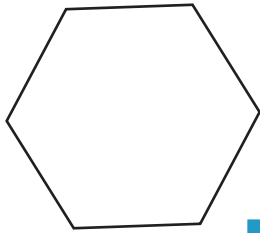
www.mathworksheets4kids.com

Answer key**Polygon - Side Length**

DS5

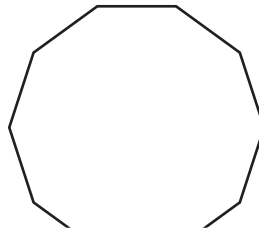
Calculate the length of the side of each polygon.

1)

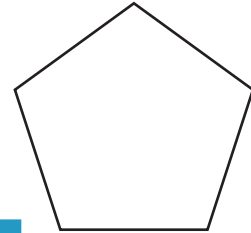


Perimeter = _____
 Number of sides = _____
 Length of each side = _____

2)

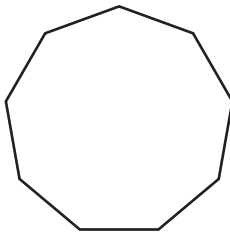


3)



Perimeter = 31.5 yd
 Number of sides = 5
 Length of each side = 6.3 yd

4)




Perimeter = _____
 Number of sides = _____
 Length of each side = _____

PREVIEW
 Access the largest collection of
 worksheets for just **\$19.95** per year!

Members, please
 log in to
 download this
 worksheet.

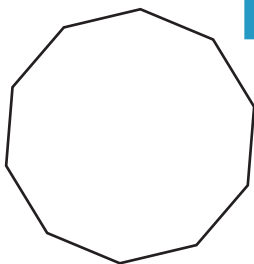
Log in

Not a member?
 Please sign up to
 gain complete
 access.

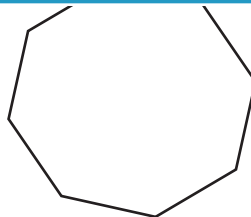
Sign up

Perimeter = 55.6 in
 Number of sides = 4
 Length of each side = 13.9 in

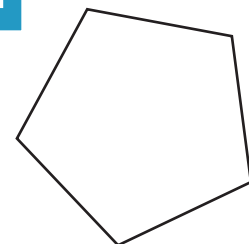
7)



Perimeter = 96 yd
 Number of sides = 10
 Length of each side = 9.6 yd



Perimeter = 70.4 in
 Number of sides = 8
 Length of each side = 8.8 in



Perimeter = 63 ft
 Number of sides = 5
 Length of each side = 12.6 ft