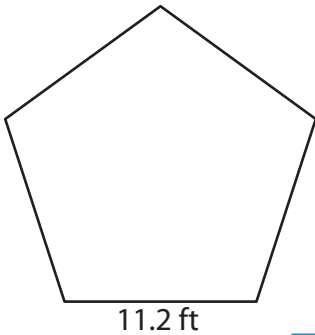


Name : _____

Perimeter of a Polygon

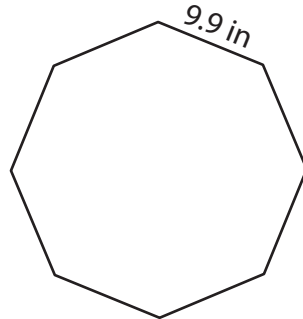
Find the perimeter of each regular polygon.

1)



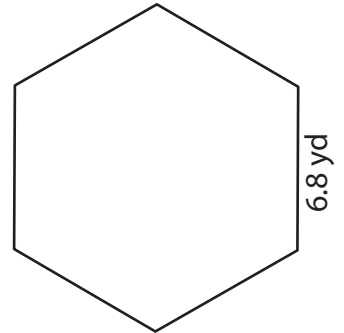
Perimeter =

2)

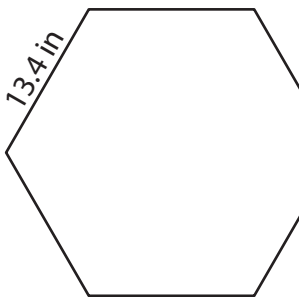


Perimeter =

3)



4)



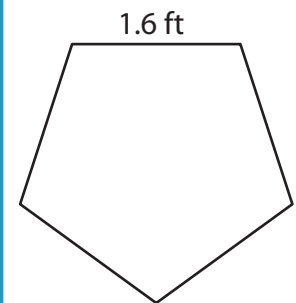
Perimeter =

PREVIEW
Gain complete access to the largest collection of worksheets in all subjects!

Members, please log in to download this worksheet.


Not a member? Please sign up to gain complete access.

www.mathworksheets4kids.com

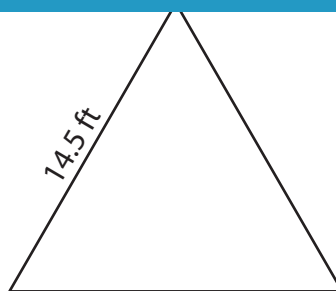


Perimeter =

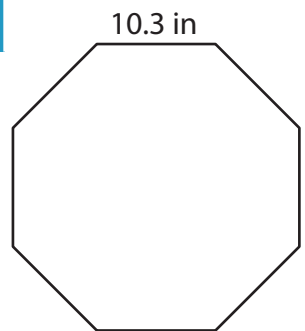
7)



Perimeter =



Perimeter =



Perimeter =

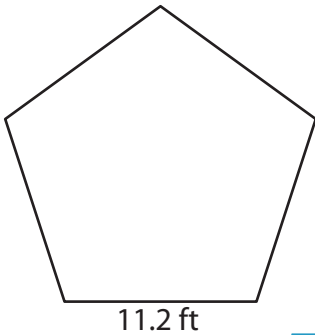
Name : _____

Answer key

Perimeter of a Polygon

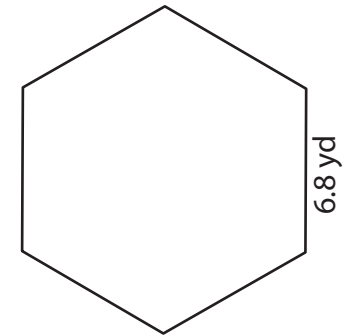
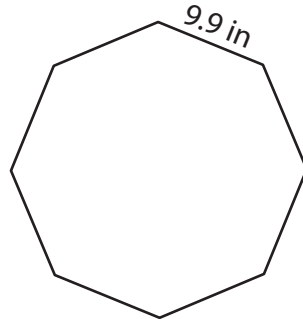
Find the perimeter of each regular polygon.

1)



Perimeter = **56 ft**

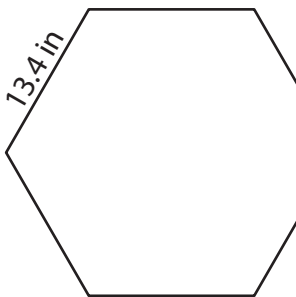
2)



3)

Perimeter = **40.8 yd**

4)



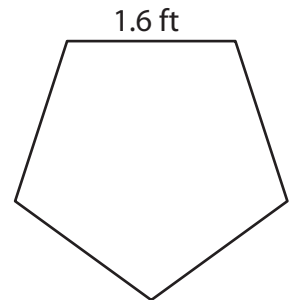
Perimeter = **80.4 in**

PREVIEW
Gain complete access to the largest collection of worksheets in all subjects!

Members, please log in to download this worksheet.

Not a member? Please sign up to gain complete access.

www.mathworksheets4kids.com

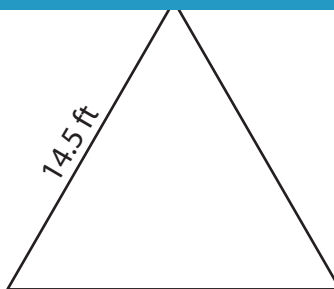


Perimeter = **8 ft**

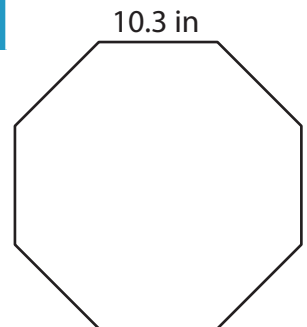
7)



Perimeter = **28.4 yd**



Perimeter = **43.5 ft**



Perimeter = **82.4 in**