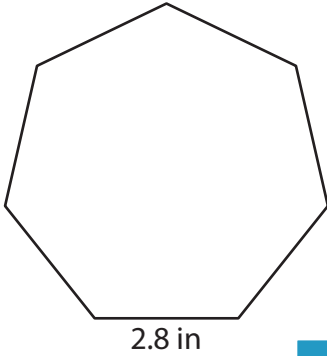


Name : _____

Perimeter of a Polygon

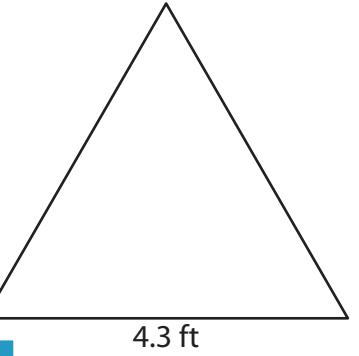
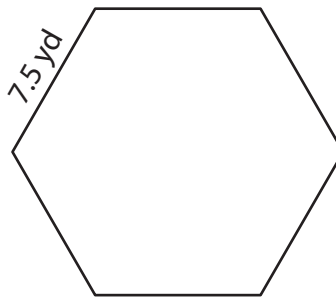
Find the perimeter of each regular polygon.

1)



Perimeter =

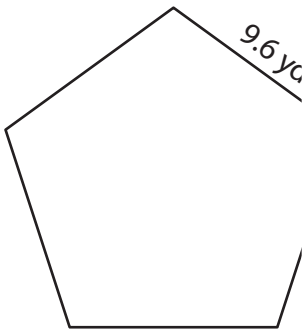
2)



3)

Perimeter =

4)



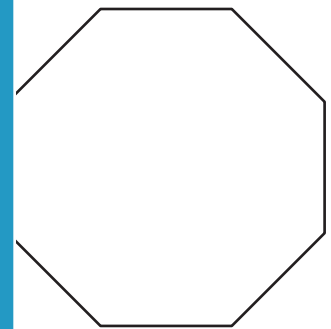
Perimeter =

PREVIEW
Gain complete access to the largest collection of worksheets in all subjects!

Members, please log in to download this worksheet.

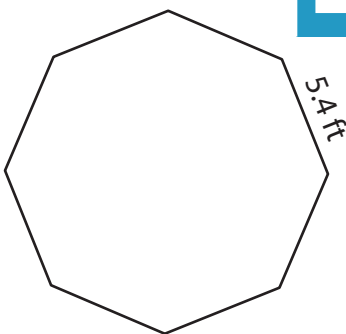
Not a member? Please sign up to gain complete access.

www.mathworksheets4kids.com

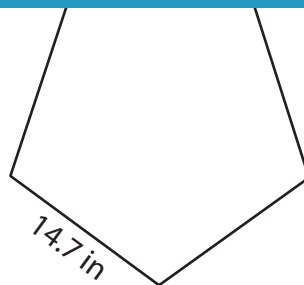


Perimeter =

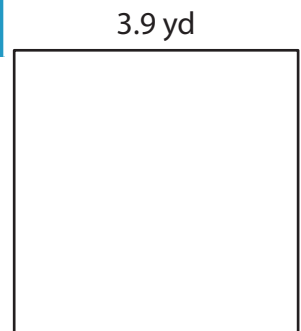
7)



Perimeter =



Perimeter =



Perimeter =

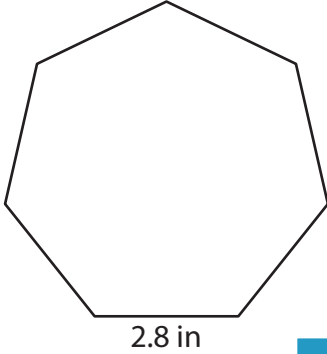
Name : _____

Answer key

Perimeter of a Polygon

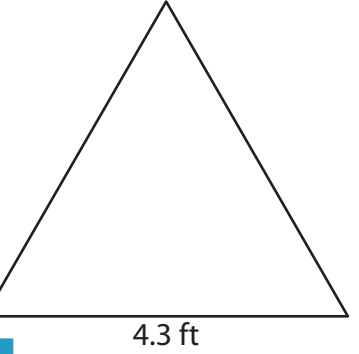
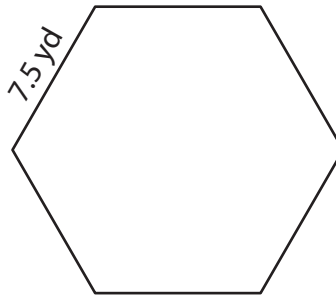
Find the perimeter of each regular polygon.

1)



Perimeter = **19.6 in**

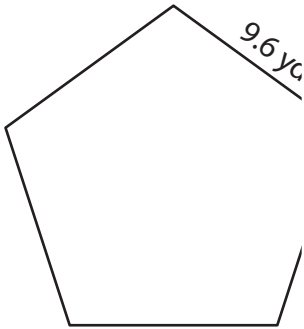
2)



3)

Perimeter = **12.9 ft**

4)



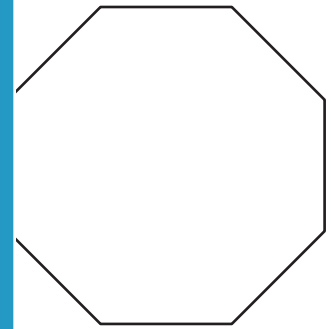
Perimeter = **48 yd**

PREVIEW
Gain complete access to the largest collection of worksheets in all subjects!

Members, please log in to download this worksheet.

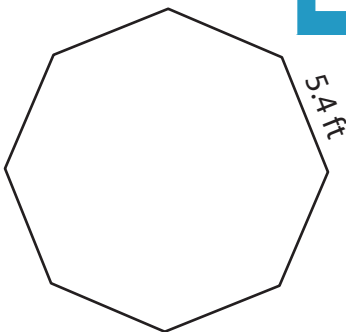
Not a member? Please sign up to gain complete access.

www.mathworksheets4kids.com

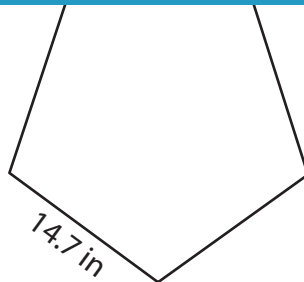


Perimeter = **81.6 in**

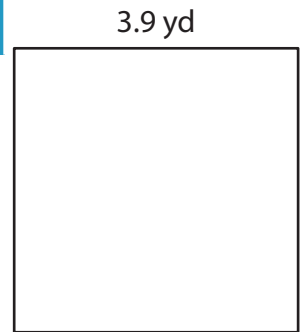
7)



Perimeter = **43.2 ft**



Perimeter = **73.5 in**



Perimeter = **15.6 yd**