


Name : _____

Perimeter of a Polygon

Find the perimeter of each regular polygon.

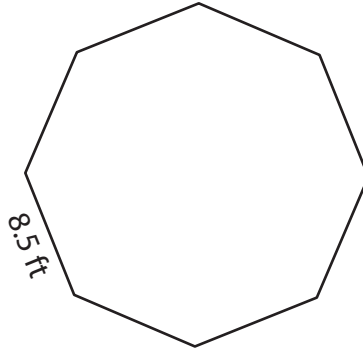
1)



14.8 yd

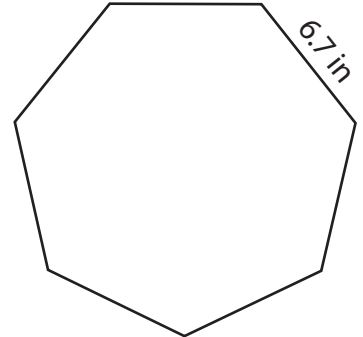
Perimeter =

2)



8.5 ft

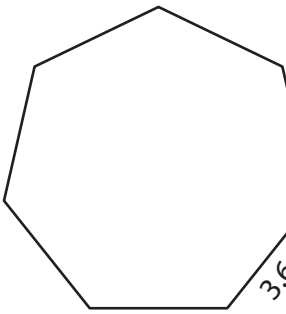
3)



6.7 in

Perimeter =

4)



3.6

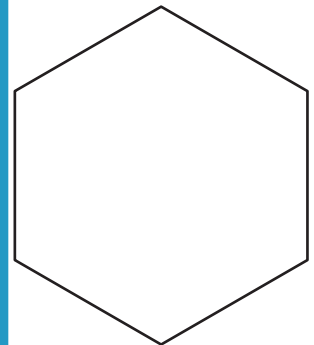
Perimeter =

PREVIEW
Gain complete access to the largest collection of worksheets in all subjects!

Members, please log in to download this worksheet.

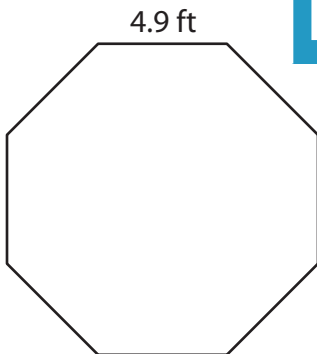
Not a member? Please sign up to gain complete access.

www.mathworksheets4kids.com



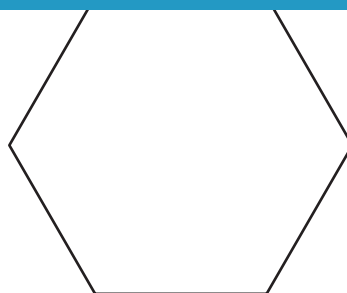
Perimeter =

7)



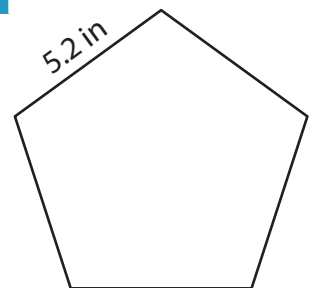
4.9 ft

Perimeter =



2.1 yd

Perimeter =




5.2 in

Perimeter =

Perimeter of a Polygon

Find the perimeter of each regular polygon.

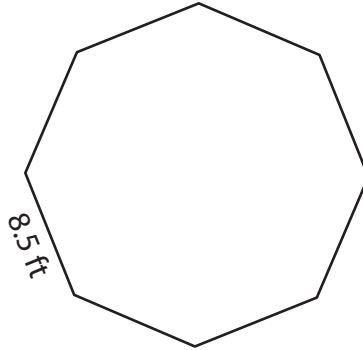
1)



14.8 yd

Perimeter = **59.2 yd**

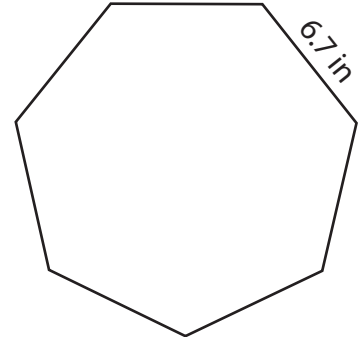
2)



8.5 ft

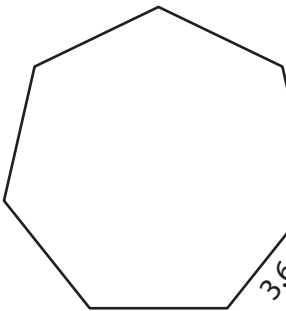
Perimeter = **46.9 in**

3)



6.7 in

4)



3.6

Perimeter = **25.2 ft**

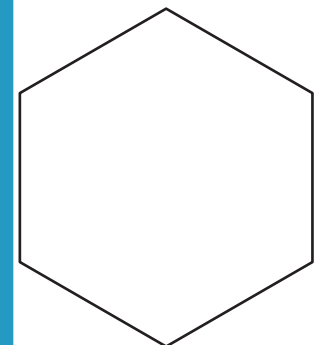
PREVIEW

Gain complete access to the largest
collection of worksheets in all subjects!

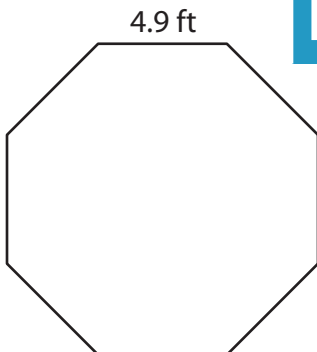
Members, please
log in to
download this
worksheet.

Not a member?
Please sign up to
gain complete
access.

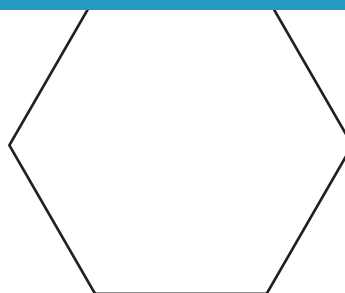
www.mathworksheets4kids.com

Perimeter = **74.4 yd**

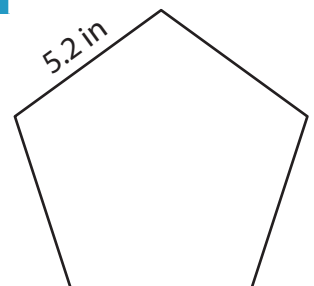
7)



4.9 ft

Perimeter = **39.2 ft**

2.1 yd

Perimeter = **12.6 yd**

5.2 in

Perimeter = **26 in**