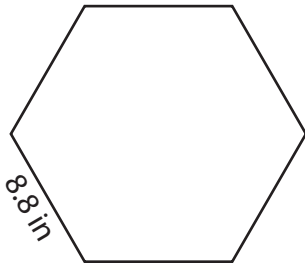


Name : \_\_\_\_\_

## Perimeter of a Polygon

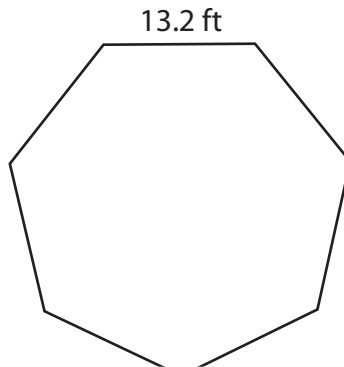
Find the perimeter of each regular polygon.

1)



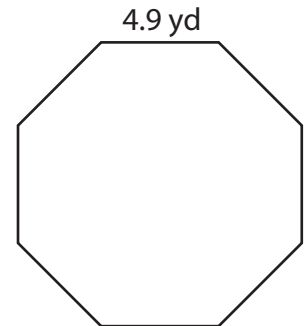
Perimeter =

2)



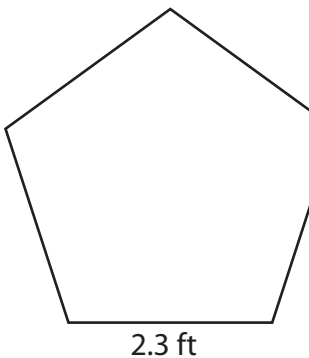
Perimeter =

3)



Perimeter =

4)



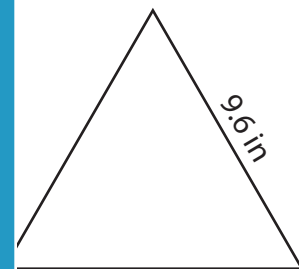
Perimeter =

Gain complete access to the largest collection of worksheets in all subjects!

Members, please log in to download this worksheet.

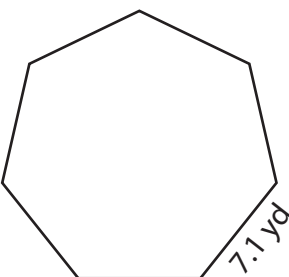
Not a member? Please sign up to gain complete access.

[www.mathworksheets4kids.com](http://www.mathworksheets4kids.com)

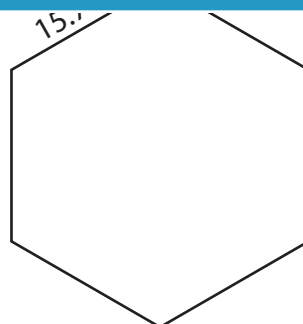


Perimeter =

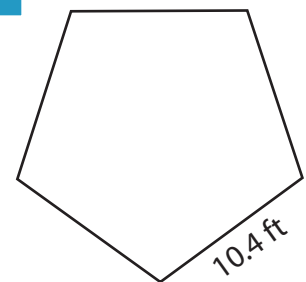
7)



Perimeter =



Perimeter =

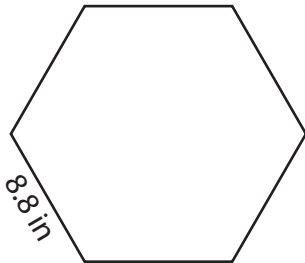


Perimeter =

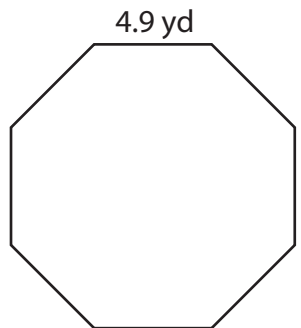
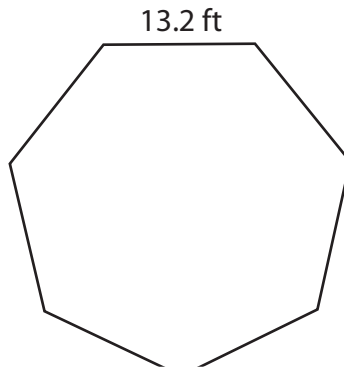
## Perimeter of a Polygon

Find the perimeter of each regular polygon.

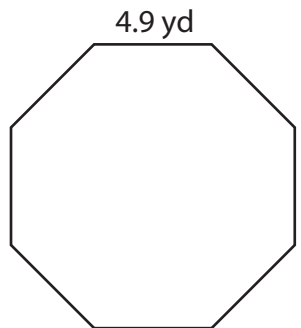
1)

Perimeter = **52.8 in**

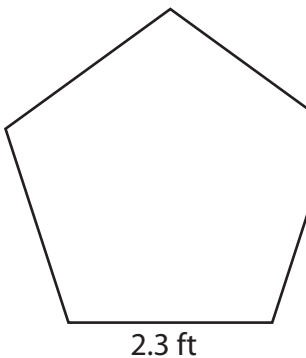
2)



3)

Perimeter = **39.2 yd**

4)

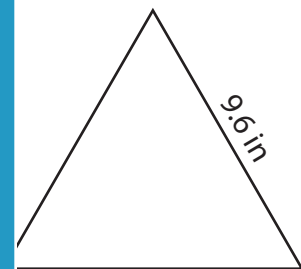
Perimeter = **11.5 ft**

**PREVIEW**  
Gain complete access to the largest  
collection of worksheets in all subjects!

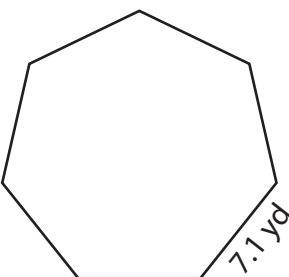
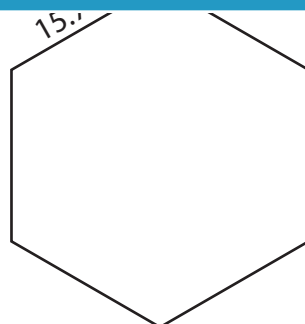
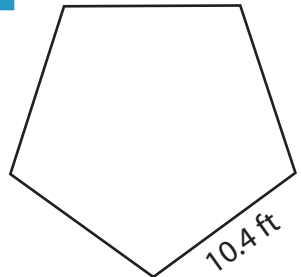
Members, please  
log in to  
download this  
worksheet.

Not a member?  
Please sign up to  
gain complete  
access.

[www.mathworksheets4kids.com](http://www.mathworksheets4kids.com)

Perimeter = **28.8 in**

7)

Perimeter = **49.7 yd**Perimeter = **94.2 in**Perimeter = **52 ft**