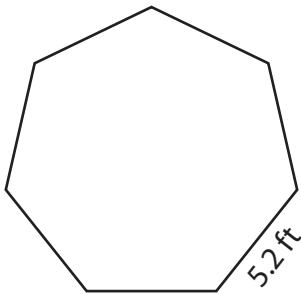


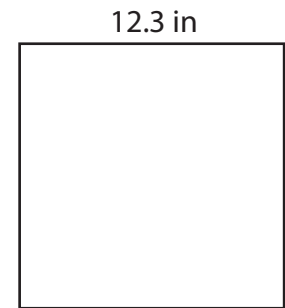
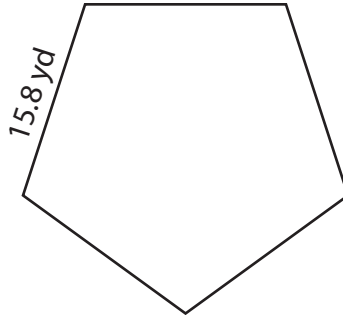
Perimeter of a Polygon

Find the perimeter of each regular polygon.

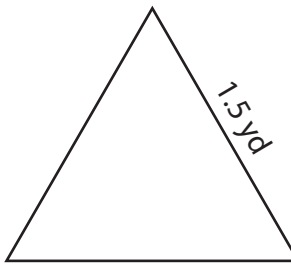
1)

Perimeter =

2)

Perimeter =

4)

Perimeter =

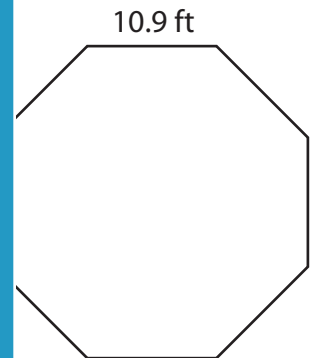
PREVIEW

Gain complete access to the largest
collection of worksheets in all subjects!


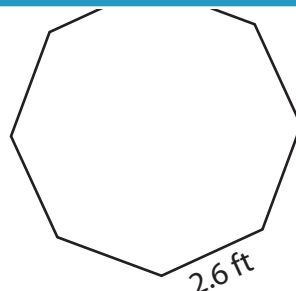
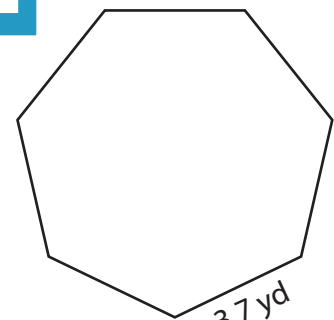
Members, please
log in to
download this
worksheet.

Not a member?
Please sign up to
gain complete
access.

www.mathworksheets4kids.com

Perimeter =

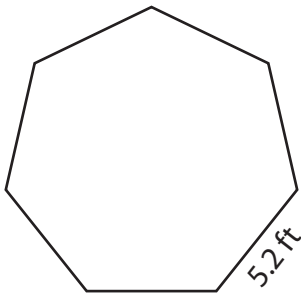
7)

Perimeter = Perimeter = Perimeter =

Perimeter of a Polygon

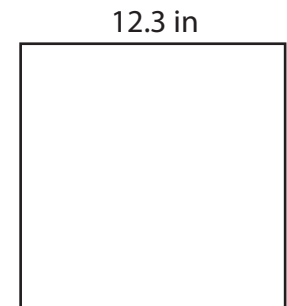
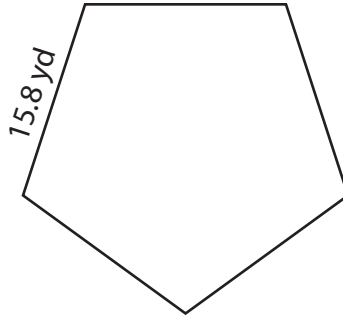
Find the perimeter of each regular polygon.

1)



Perimeter = **36.4 ft**

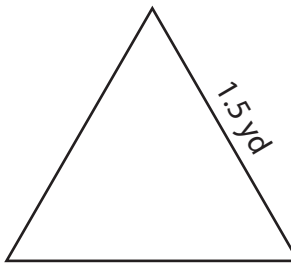
2)



Perimeter = **49.2 in**

3)

4)



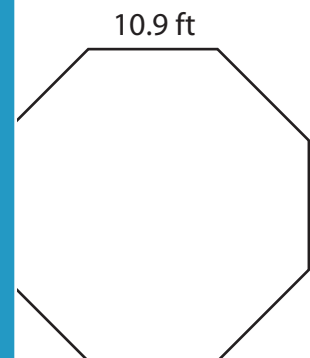
Perimeter = **4.5 yd**

Gain complete access to the largest collection of worksheets in all subjects!

Members, please log in to download this worksheet.


Not a member? Please sign up to gain complete access.

www.mathworksheets4kids.com

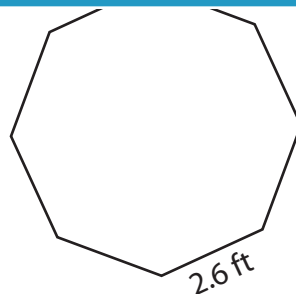


Perimeter = **87.2 ft**

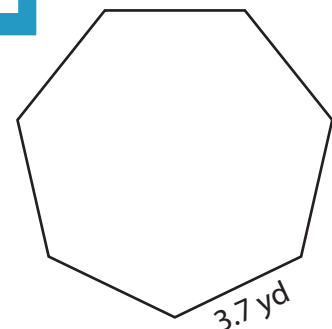
7)



Perimeter = **72 in**



Perimeter = **20.8 ft**



Perimeter = **25.9 yd**