

Name : _____

L1S4

Perimeter of a Polygon

A) Find the perimeter of each regular polygon.

1) Side length = 13 in, Number of sides = 5

Perimeter = _____

2) Side length = 2 yd, Number of sides = 3

Perimeter = _____

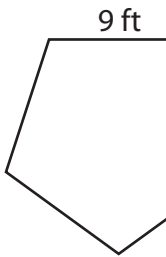
3) Side length = 7 yd, Number of sides = 4

Perimeter = _____

4) Side length = 18 ft, Number of sides = 6

Perimeter = _____

5)



Perimeter = _____



19 yd

Perimeter = _____

B) Find the perimeter

8) 14 yd, 20 yd, 9 yd,

Perimeter = _____

the lengths.

ft, 14 ft, 8 ft, 3 ft

10) 10 in, 11 in, 8 in, 1

Perimeter = _____

3 yd, 17 yd

PREVIEW

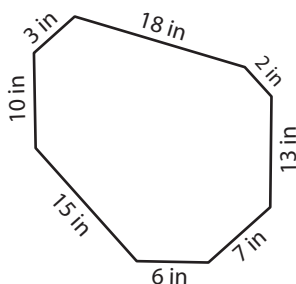
Gain complete access to the largest collection of worksheets in all subjects!

Members, please log in to download this worksheet.

Not a member? Please sign up to gain complete access.

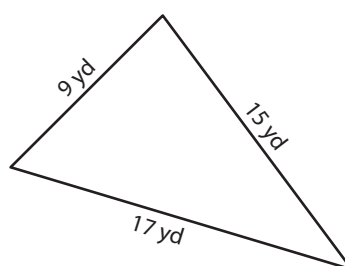
www.mathworksheets4kids.com

12)



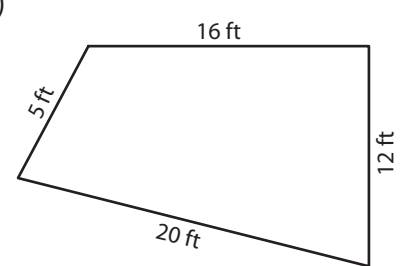
Perimeter = _____

13)



Perimeter = _____

14)



Perimeter = _____

Perimeter of a Polygon

A) Find the perimeter of each regular polygon.

1) Side length = 13 in, Number of sides = 5

Perimeter = 65 in

2) Side length = 2 yd, Number of sides = 3

Perimeter = 6 yd

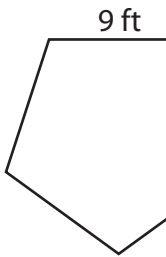
3) Side length = 7 yd, Number of sides = 4

Perimeter = 28 yd

4) Side length = 18 ft, Number of sides = 6

Perimeter = 108 ft

5)



Perimeter = _____

PREVIEW

Gain complete access to the largest
collection of worksheets in all subjects!

Members, please
log in to
download this
worksheet.

Not a member?
Please sign up to
gain complete
access.

www.mathworksheets4kids.com



19 yd

Perimeter = 76 yd

B) Find the perimeter

8) 14 yd, 20 yd, 9 yd,

Perimeter = _____

side lengths.

14 yd, 14 ft, 8 ft, 3 ft

Perimeter = 77 ft

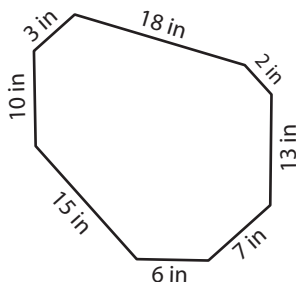
10) 10 in, 11 in, 8 in, 1

Perimeter = _____

13 yd, 17 yd

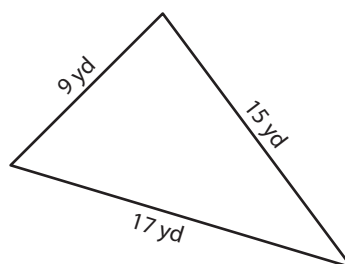
Perimeter = 44 yd

12)



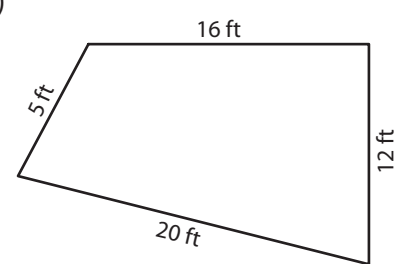
Perimeter = 74 in

13)



Perimeter = 41 yd

14)



Perimeter = 53 ft