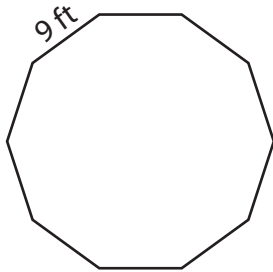


Name : _____

Perimeter of a Polygon

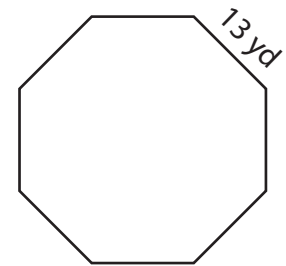
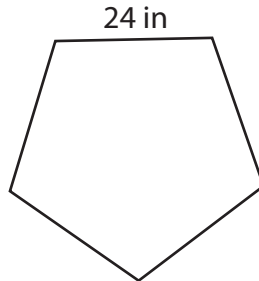
Find the perimeter of each regular polygon.

1)



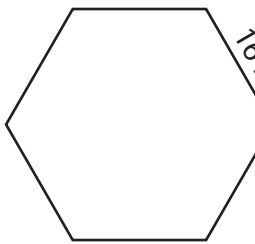
Perimeter =

2)



Perimeter =

4)



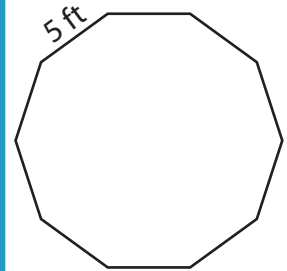
Perimeter =

PREVIEW
Gain complete access to the largest collection of worksheets in all subjects!

Members, please log in to download this worksheet.

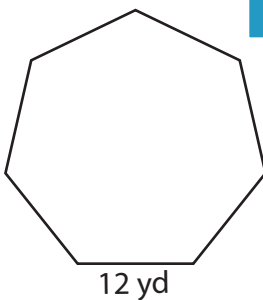
Not a member? Please sign up to gain complete access.

www.mathworksheets4kids.com

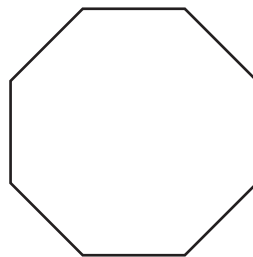


Perimeter =

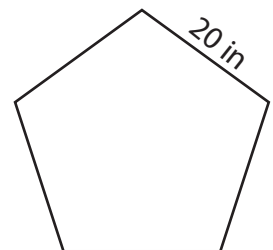
7)



Perimeter =



Perimeter =



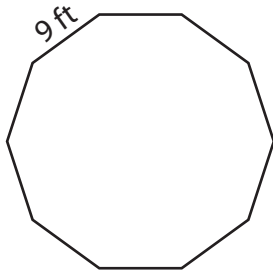
Perimeter =

Name : _____

Perimeter of a Polygon

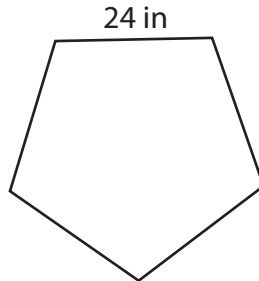
Find the perimeter of each regular polygon.

1)



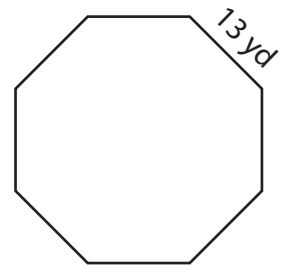
Perimeter = **90 ft**

2)



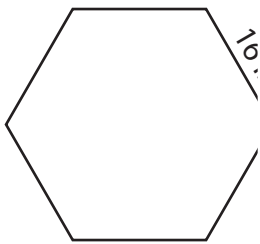
Perimeter = **80 ft**

3)



Perimeter = **100 in**

4)



Perimeter = **96 in**

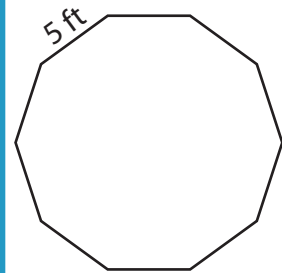
PREVIEW

Gain complete access to the largest collection of worksheets in all subjects!

Members, please log in to download this worksheet.

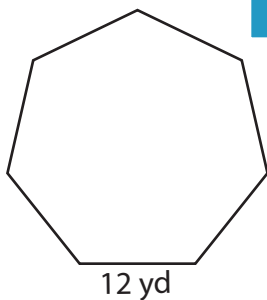
Not a member? Please sign up to gain complete access.

www.mathworksheets4kids.com

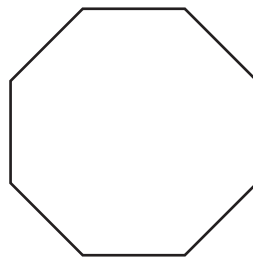


Perimeter = **50 ft**

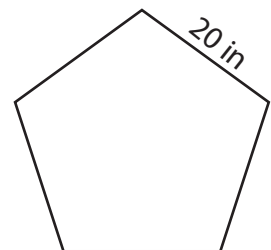
7)



Perimeter = **84 yd**



Perimeter = **80 ft**



Perimeter = **100 in**