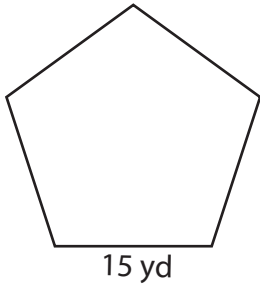


Name : _____

Perimeter of a Polygon

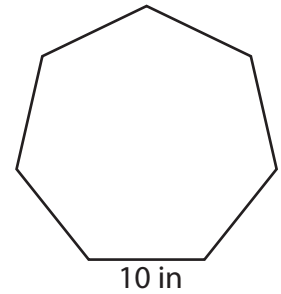
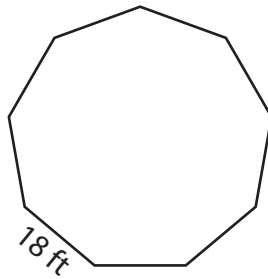
Find the perimeter of each regular polygon.

1)



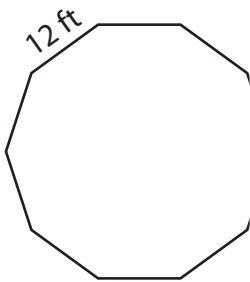
Perimeter =

2)



Perimeter =

4)



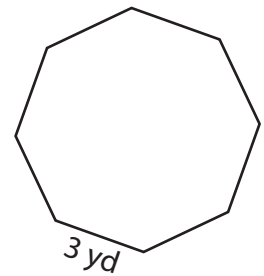
Perimeter =

Gain complete access to the largest collection of worksheets in all subjects!

Members, please log in to download this worksheet.

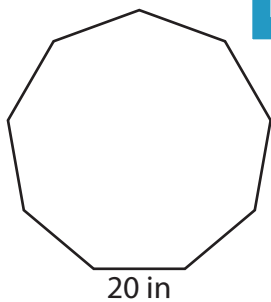
Not a member? Please sign up to gain complete access.

www.mathworksheets4kids.com

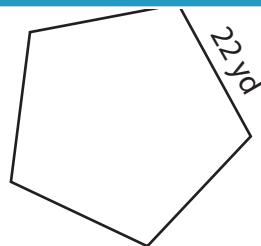


Perimeter =

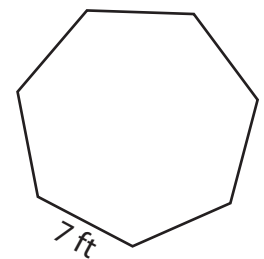
7)



Perimeter =



Perimeter =



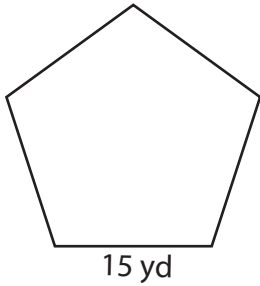
Perimeter =

Name : _____

Perimeter of a Polygon

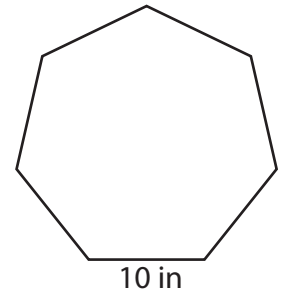
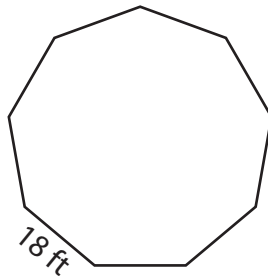
Find the perimeter of each regular polygon.

1)



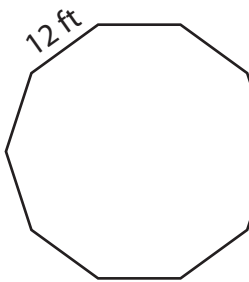
Perimeter = **75 yd**

2)



Perimeter = **70 in**

4)



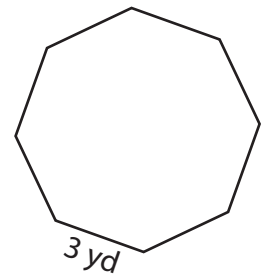
Perimeter = **120 ft**

Gain complete access to the largest collection of worksheets in all subjects!

Members, please log in to download this worksheet.

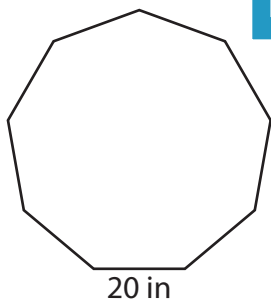
Not a member? Please sign up to gain complete access.

www.mathworksheets4kids.com

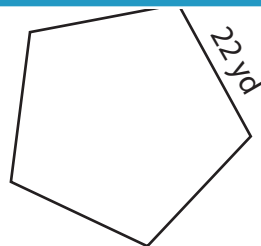


Perimeter = **24 yd**

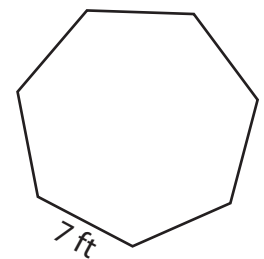
7)



Perimeter = **180 in**



Perimeter = **110 yd**



Perimeter = **49 ft**