


# Polygon - Side Length

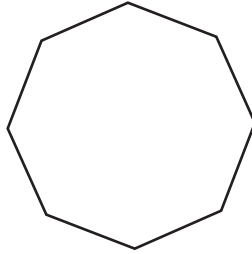
Find the side length of each regular polygon.

1)



Perimeter = \_\_\_\_\_  
 Number of sides = \_\_\_\_\_  
 Length of each side = \_\_\_\_\_

2)



## PREVIEW

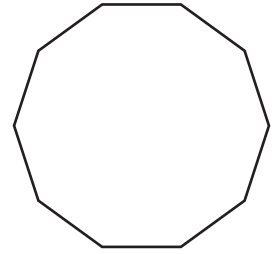
Gain complete access to the largest collection of worksheets in all subjects!

Members, please log in to download this worksheet.

Not a member? Please sign up to gain complete access.

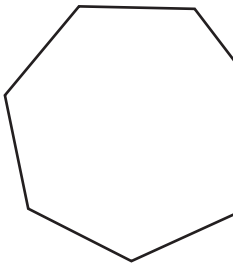
[www.mathworksheets4kids.com](http://www.mathworksheets4kids.com)

3)

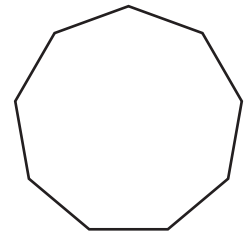


Perimeter = 20 ft  
 Number of sides = \_\_\_\_\_  
 Length of each side = \_\_\_\_\_

4)

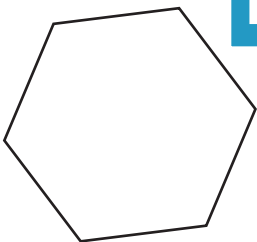


Perimeter = \_\_\_\_\_  
 Number of sides = \_\_\_\_\_  
 Length of each side = \_\_\_\_\_

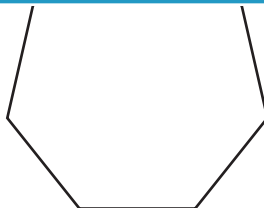


Perimeter = 54 yd  
 Number of sides = \_\_\_\_\_  
 Length of each side = \_\_\_\_\_

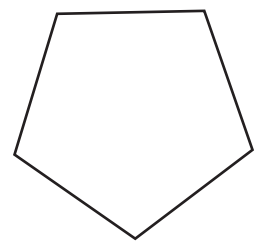
7)



Perimeter = 48 yd  
 Number of sides = \_\_\_\_\_  
 Length of each side = \_\_\_\_\_



Perimeter = 63 ft  
 Number of sides = \_\_\_\_\_  
 Length of each side = \_\_\_\_\_




Perimeter = 75 in  
 Number of sides = \_\_\_\_\_  
 Length of each side = \_\_\_\_\_

Name : \_\_\_\_\_

**Polygon - Side Length**

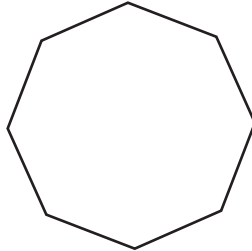
Find the side length of each regular polygon.

1)



Perimeter = \_\_\_\_\_  
 Number of sides = \_\_\_\_\_  
 Length of each side = \_\_\_\_\_

2)



# PREVIEW

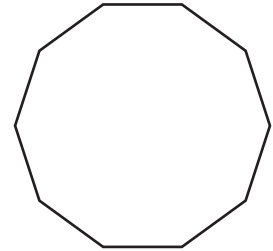
Gain complete access to the largest collection of worksheets in all subjects!

Members, please log in to download this worksheet.

Not a member? Please sign up to gain complete access.

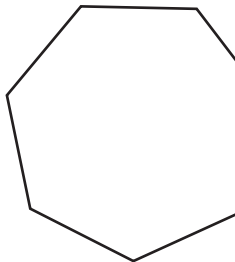
[www.mathworksheets4kids.com](http://www.mathworksheets4kids.com)

3)

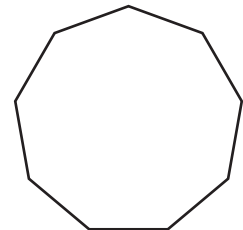


Perimeter = 20 ft  
 Number of sides = 10  
 Length of each side = 2 ft

4)

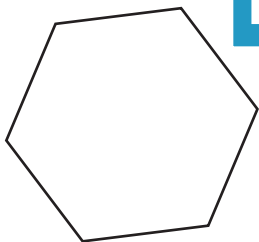


Perimeter = \_\_\_\_\_  
 Number of sides = \_\_\_\_\_  
 Length of each side = \_\_\_\_\_

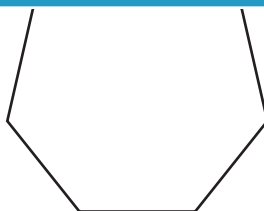


Perimeter = 54 yd  
 Number of sides = 9  
 Length of each side = 6 yd

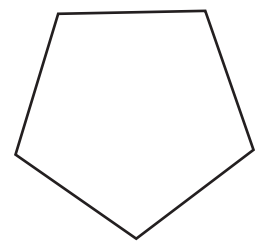
7)



Perimeter = 48 yd  
 Number of sides = 6  
 Length of each side = 8 yd



Perimeter = 63 ft  
 Number of sides = 7  
 Length of each side = 9 ft



Perimeter = 75 in  
 Number of sides = 5  
 Length of each side = 15 in