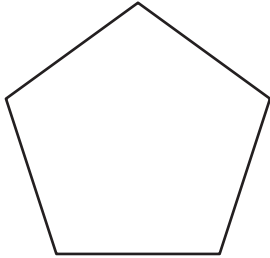


Name : _____

Polygon - Side Length

Find the side length of each regular polygon. Round your answer to the nearest tenth.

1)

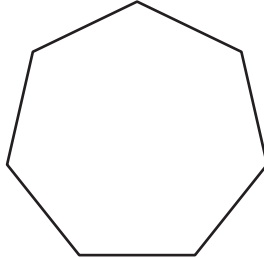


Perimeter = 66

Number of sides = _____

Length of each side = _____

2)

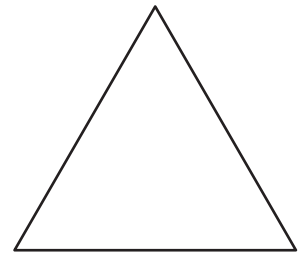


Perimeter = 15.6 yd

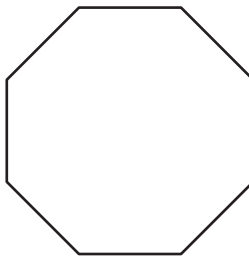
Number of sides = _____

Length of each side = _____

3)



4)



Perimeter = 27

Number of sides = _____

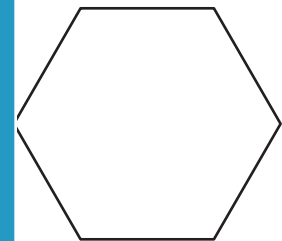
Length of each side = _____

PREVIEW
Gain complete access to the largest collection of worksheets in all subjects!

Members, please log in to download this worksheet.

Not a member? Please sign up to gain complete access.

www.mathworksheets4kids.com

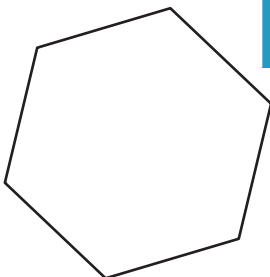


Perimeter = 72.8 ft

Number of sides = _____

Length of each side = _____


7)



Perimeter = 89 yd

Number of sides = _____

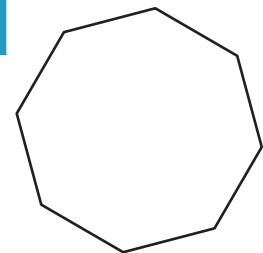
Length of each side = _____



Perimeter = 48.9 ft

Number of sides = _____

Length of each side = _____



Perimeter = 99.2 in

Number of sides = _____

Length of each side = _____

Name : _____

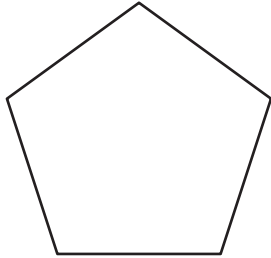
Answer key

Sheet 1

Polygon - Side Length

Find the side length of each regular polygon. Round your answer to the nearest tenth.

1)

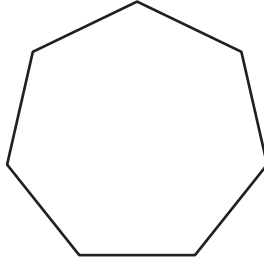


Perimeter = 66

Number of sides = 5

Length of each side = 13.2

2)

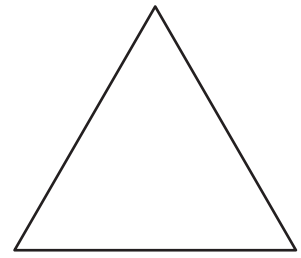


Perimeter = 46.8

Number of sides = 7

Length of each side = 6.7

3)

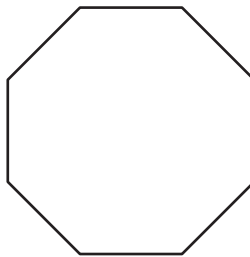


Perimeter = 15.6 yd

Number of sides = 3

Length of each side = 5.2 yd

4)



Perimeter = 27

Number of sides = 8

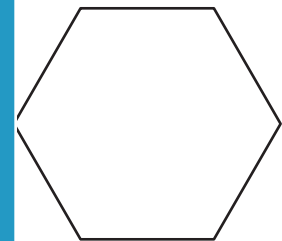
Length of each side = 3.4

PREVIEW
Gain complete access to the largest collection of worksheets in all subjects!

Members, please log in to download this worksheet.

Not a member? Please sign up to gain complete access.

www.mathworksheets4kids.com

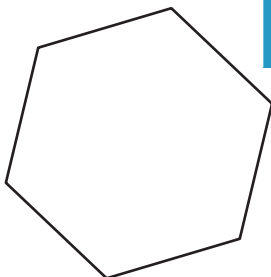


Perimeter = 72.8 ft

Number of sides = 6

Length of each side = 12.1 ft


7)



Perimeter = 89 yd

Number of sides = 6

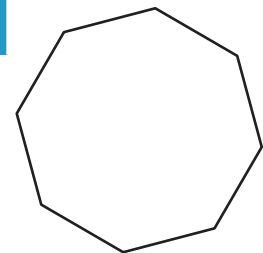
Length of each side = 14.8 yd



Perimeter = 48.9 ft

Number of sides = 5

Length of each side = 9.8 ft



Perimeter = 99.2 in

Number of sides = 8

Length of each side = 12.4 in