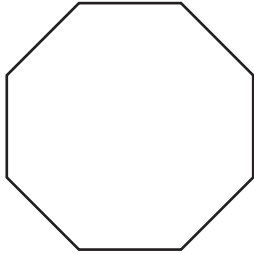


Name : _____

Polygon - Side Length

Find the side length of each regular polygon. Round your answer to the nearest tenth.

1)

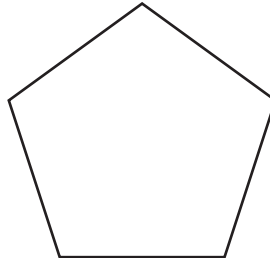


Perimeter = 41

Number of sides = _____

Length of each side = _____

2)

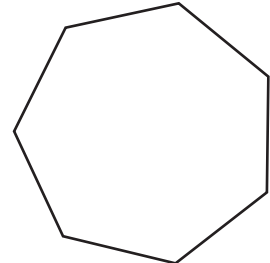


Perimeter = 64.3 in

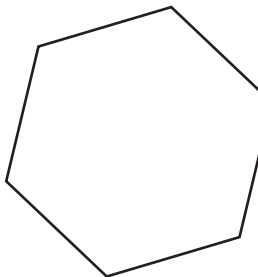
Number of sides = _____

Length of each side = _____

3)



4)



Perimeter = 39

Number of sides = _____

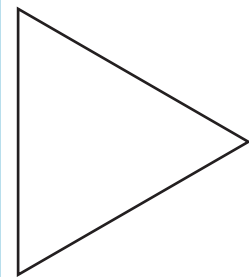
Length of each side = _____

PREVIEW
Gain complete access to the largest collection of worksheets in all subjects!

Members, please log in to download this worksheet.

Not a member? Please sign up to gain complete access.

www.mathworksheets4kids.com



Perimeter = 16 yd

Number of sides = _____

Length of each side = _____

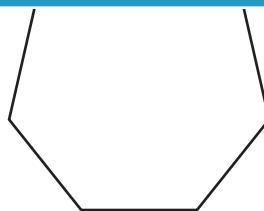
7)



Perimeter = 58.6 yd

Number of sides = _____

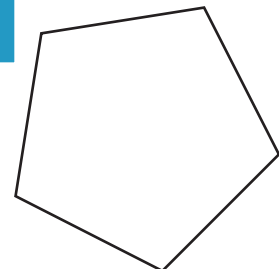
Length of each side = _____



Perimeter = 77.8 in

Number of sides = _____

Length of each side = _____



Perimeter = 92.4 ft

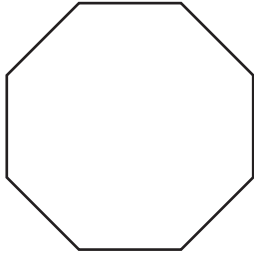
Number of sides = _____

Length of each side = _____

Polygon - Side Length

Find the side length of each regular polygon. Round your answer to the nearest tenth.

1)

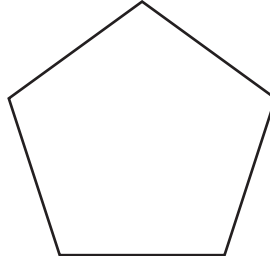


Perimeter = 41

Number of sides = 8

Length of each side = 5.1

2)

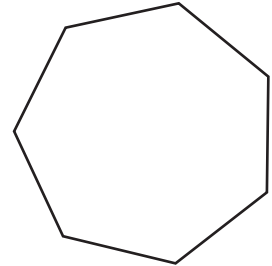


Perimeter = 64.3 in

Number of sides = 5

Length of each side = 12.86 in

3)

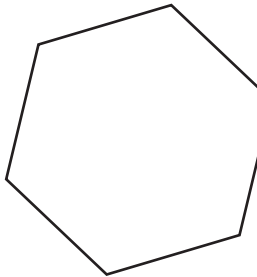


Perimeter = 64.3 in

Number of sides = 7

Length of each side = 9.2 in

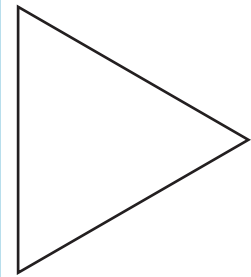
4)



Perimeter = 39

Number of sides = 6

Length of each side = 6.5



Perimeter = 16 yd

Number of sides = 3

Length of each side = 5.3 yd

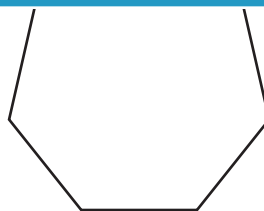
7)



Perimeter = 58.6 yd

Number of sides = 4

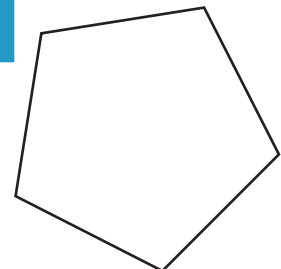
Length of each side = 14.7 yd



Perimeter = 77.8 in

Number of sides = 7

Length of each side = 11.1 in



Perimeter = 92.4 ft

Number of sides = 5

Length of each side = 18.5 ft

PREVIEW

Gain complete access to the largest collection of worksheets in all subjects!

Members, please log in to download this worksheet.

Not a member? Please sign up to gain complete access.

www.mathworksheets4kids.com